

# INTRODUCTION TO ROTOR DYNAMICS

- *Critical Speed and Unbalance Response Analysis* -

E. J. Gunter, Ph.D.  
Fellow, ASME

**RODYN** Vibration Analysis, Inc.  
1932 Arlington Boulevard, Suite 223  
Charlottesville, VA 22903-1560

*October 2001*

Rotating machinery such as compressors, turbines, pumps, jet engines, turbochargers, etc., are subject to vibrations. These vibrations are broadly classified as synchronous (due to unbalance) or nonsynchronous such as caused by self excited rotor whirling. The three major areas of concern are rotor critical speeds, system stability and unbalance response. Critical speeds are the undamped natural frequencies of the rotor system. As a first step in turborotor design, an analysis is performed to determine the system critical speeds, mode shapes and energy distribution. The evaluation of the bearing strain energy, for example, can give us important insight as to whether we may expect to encounter stability and unbalance response problems for a particular mode. Usually the critical speeds are desired to be 10% to 20% above or below the operating speed range. However, there are many rotors that operate on top of the second critical speed due to sufficient bearing damping. Often attempts to elevate the 2<sup>nd</sup> critical speed by increased bearing stiffness leads to serious 1<sup>st</sup> mode stability problems.

When bearing and seal damping is included, we can compute the damped natural frequencies or complex eigenvalues of the system. The real part of the complex eigenvalue determines the modal log decrement. From this quantity we can evaluate the stability margin and compute the rotor critical speed amplification factors. If the log dec is positive, the system is stable for that mode. If the log dec is  $> 2$ , then there will be little unbalance excitation.

The rotor unbalance response represents the rotor synchronous excitation due to rotor unbalance, shaft bow or disk skew. The **DYROBES** program is capable of computing the rotor response due to these various excitation mechanisms. Under certain bearing or support conditions, the rotor response may be nonlinear. This is caused by nonlinear squeeze film dampers, rolling element bearings, or fluid film bearings with high unbalance. With some nonlinear effects, it is necessary to compute the time transient motion of the system. **DYROBES** may be used for time transient torsional as well as lateral response.

In this presentation, some of the basic features of **DYROBES** will be presented starting with an introduction to rotor dynamics by first presenting an analysis of the single mass flexible rotor referred to as the Jeffcott rotor. The rotor model will then be extended to include damped bearings and flexible supports. Analytical expressions are presented for this model for the computation of the critical speed, log dec and rotor response obtained for the rotor critical speeds. The **DYROBES** program will be used to illustrate the characteristics of the extended Jeffcott rotor on flexible supports and more complex rotors.

Although the presentation is based on the simple Jeffcott rotor, the concepts are applicable to multi-mass rotors which operate below the second critical speed. Examples are given here to illustrate the use of the single mass results to industrial machines.

### 2.1 Jeffcott Rotor Description

Figure 2.1 represents the single-mass Jeffcott rotor mounted on a uniform massless elastic shaft. The rotor mass  $\mathbf{M}$  is considered as concentrated at the rotor center. The mass center of the rotor is displaced from the rotor elastic axis by the distance  $e_u$ .

The rotor equations of motion may be expressed in terms of the Cartesian coordinates of the elastic axis ( $X, Y$ ) or by using the polar coordinates  $Z$  and  $\theta$ . At zero speed, the point C lies along the origin of the coordinates.

The complex amplitude  $Z$  is

$$Z = X + iY = \text{Complex Rotor Displacement} \quad (2.1-1)$$

with amplitude  $A$  and phase angle  $\theta$  relative to the x axis

$$A = |Z| = \text{Rotor Amplitude} \quad (2.1-2)$$

$$\theta = \arctan (Y/X) = \text{Rotor Phase Angle}$$

The phase angle is taken as a phase lag so it appears after the reference mark passes.

A reference mark is placed on the shaft in order to determine phase. This may be a slot cut in the shaft or another mark on the shaft. In rotating machinery operations, instrumentation called a key phasor locates this reference mark. The displacement phase angle is measured relative to the key phasor  $\phi$  rather than to the positive x axis  $\theta$ .

$$\phi = \text{Phase Angle Relative to the Key Phasor}$$

The relative phase angle is commonly measured as a phase lag so that the reference mark passes the key phasor before the rotor. This phase angle is much more useful because it rotates with the shaft. It will be used from now on.

#### **Example 2.1 Rotor Amplitude and Phase Angle**

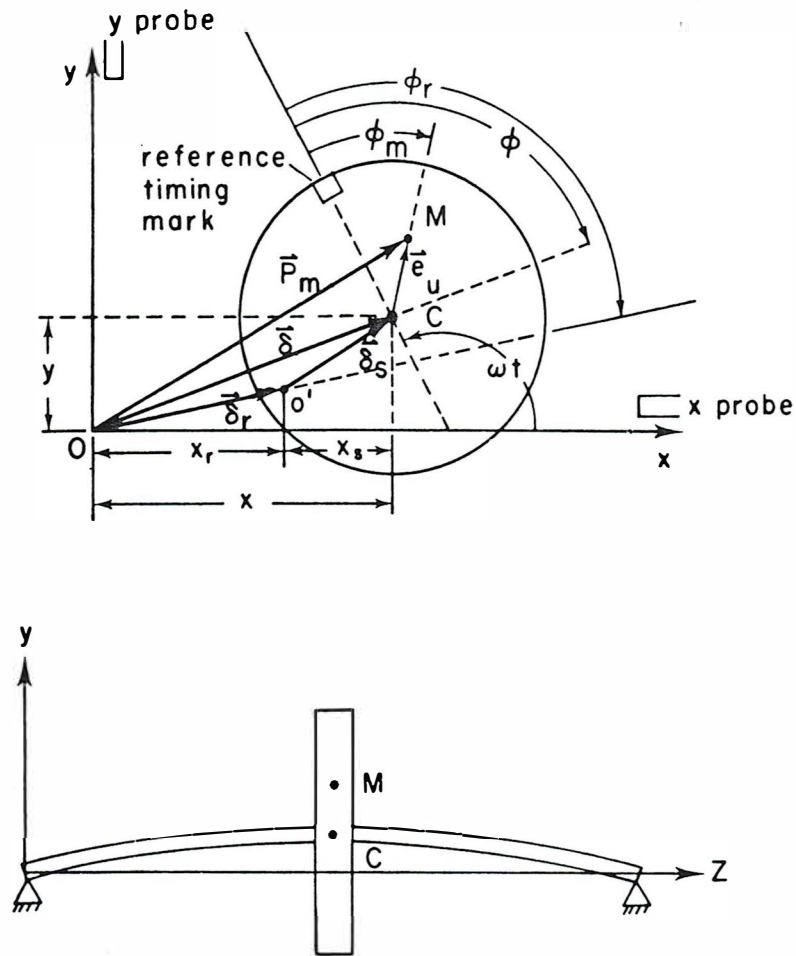
**Given:** Consider a rotor mass with geometric center located at C, as shown in Fig. 2.2. The end view shows the displacement located so that displacement probes would measure the horizontal and vertical displacements at

$$X = 1 \text{ mil} = 0.001 \text{ in (0.0254 mm)}$$

$$Y = -2 \text{ mil} = -0.002 \text{ in (-0.0508 mm)}$$

These values are at a given time  $t_0$ .

**Objective:** Find the complex vector  $Z$ , the magnitude  $A$ , and phase angle  $\theta$  of the displacement. Also determine the phase angle  $\phi_2$  relative to the key phasor if the reference mark is at 135 degrees.



**Figure 2.1 Single Mass Jeffcott Rotor on Rigid Supports**

The Jeffcott rotor as shown in Figure 2.1 has the disk mounted at the center span of the uniform shaft. The shaft mass may be included in this analysis by placing  $\frac{1}{2}$  of the total shaft mass as acting at the disc center. This assumption is accurate to  $< 1\%$  error regardless of the size of the shaft.

In the Jeffcott model, the moments of inertia  $I_p$  and  $I_t$  are not considered. This is because there are no gyroscopic moments exerted on the shaft. The disc is assumed to move in a plane that is perpendicular to the shaft spin axis. For large multi-stage compressors and turbines, in which the disks are inboard, there is little gyroscopic moment effects exerted on the first critical speed.

In the Jeffcott rotor, the bearings are considered as rigid. Since there is no bearing asymmetry, the rotor motion is circular synchronous due to unbalance. The maximum motion occurs at the rotor center and zero motion is encountered at the bearings. A similar circumstance is often encountered with multi-stage compressors with tilting pad bearings under high preload. High motions may occur at the rotor center with little motion observed at the bearings

**Objective:** Find the complex vector  $Z$ , the magnitude  $A$ , and phase angle  $\theta$  of the displacement. Also determine the phase angle  $\phi_2$  relative to the key phasor if the reference mark is at 135 degrees.

**Solution:**

The magnitude is

$$A = |Z| = \sqrt{X^2 + Y^2} = \sqrt{(1)^2 + (-2)^2}$$

$$A = 2.24 \text{ mils} = 0.00224 \text{ inches (0.0569mm)}$$

and the phase angle relative to the x axis as

$$\theta = \arctan (Y / X) = \arctan (-2/1) = 296 \text{ degrees}$$

The complex vector  $Z$  may be written in cartesian coordinates as

$$Z = 1 - 2i \text{ (mils)}$$

or in polar coordinates as

$$Z = 2.24 (\cos 296^\circ + i \sin 296^\circ)$$

or in the exponential form as

$$Z = 2.24 e^{i 296^\circ} \text{ mils (0.0569 } e^{i 296^\circ} \text{ mm)}$$

Figure 2.2 illustrates the results. The reference mark is at 135 degrees. Thus the phase angle  $\phi$  relative to the key phasor is

$$\phi = 135^\circ + (360^\circ - 296^\circ) = 201 \text{ degrees}$$

In Figure 2.2, assume that noncontact probes are located at the X and Y axes. The relative phase angle of the X probe with respect to the key phasor mark would be a log angle of  $135^\circ$  and the Y axis probe would record a log angle of  $45^\circ$ .

## 2.2 Mass and Unbalance

The rotor disk has weight  $W$  and disk (rotor) mass

$$W = \text{Disk Weight}$$

$$M = W/g = \text{Disk Mass}$$

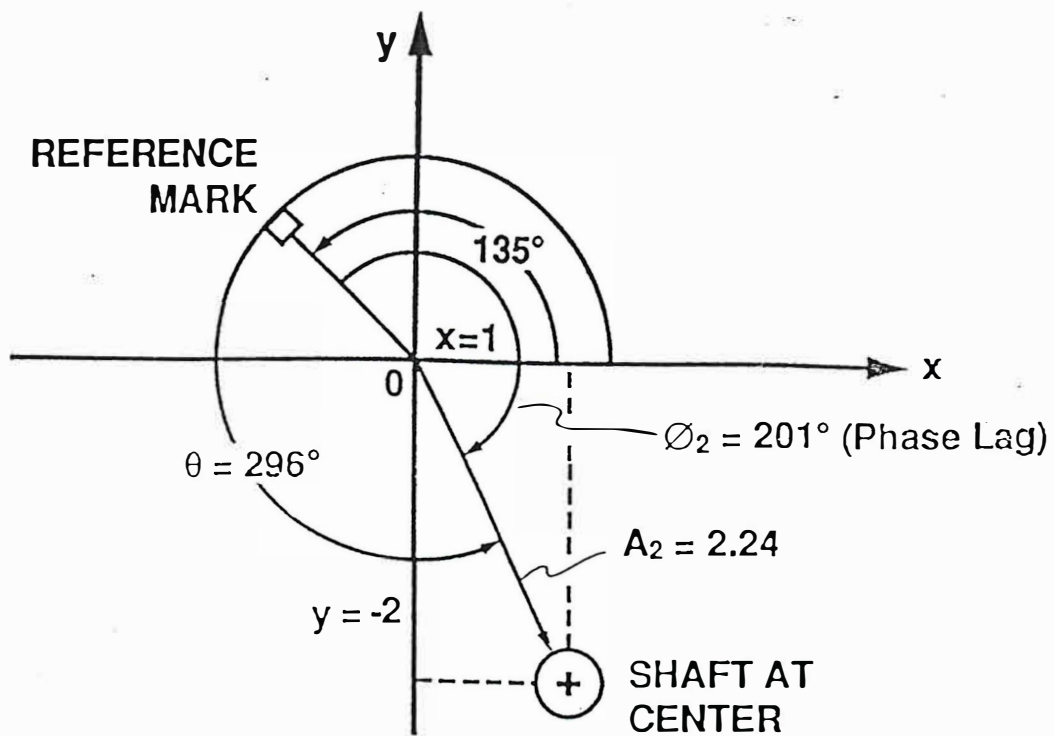


Figure 2.2 Cartesian and Polar Representations of Displacement

The mass center located at point M is different from point C, which is the shaft centerline.

An unbalance occurs when the rotor mass center M does not lie along the axis of rotation C of the rotor, as illustrated in Fig. 2.1. A single radial force is produced by rotation of the rotor. The unbalance may be detected statically (without rotation) if the rotor is placed on supports with sufficiently low friction. The unbalance will cause the rotor to rotate so that the mass center moves towards its lowest point. Figure 2.3 shows the rotor with unbalance in the downward position.

The actual unbalance U of the mass is

$$U = \text{Rotor Mass Unbalance} = W_u R_u$$

where U represents a small weight  $W_u$  placed at a certain distance  $R_u$  away from the geometric center C. In an industrial rotor, the actual unbalance is always unknown. It is usually measured in terms of units such as oz-in, gram-in, or gram-mm. It also has an angle relative to the reference mark. For the analysis here it is assumed that the reference mark is aligned with the unbalance vector. This is done without any loss in generality. Then the displacement phase angle  $\phi_2$  is relative to the unbalance vector.

In rotor vibration analysis, the unbalance eccentricity is defined as the distance between the rotor mass center M and the mass geometric center C.

$$e_u = \text{Unbalance Eccentricity}$$

The rotor mass has weight W. Then the unbalance eccentricity is given by

$$e_u = U/W \quad ; \quad \frac{e_u}{R_u} < 1 \quad (2.2-1)$$

The unbalance eccentricity is used to make the results of the vibration analysis dimensionless.

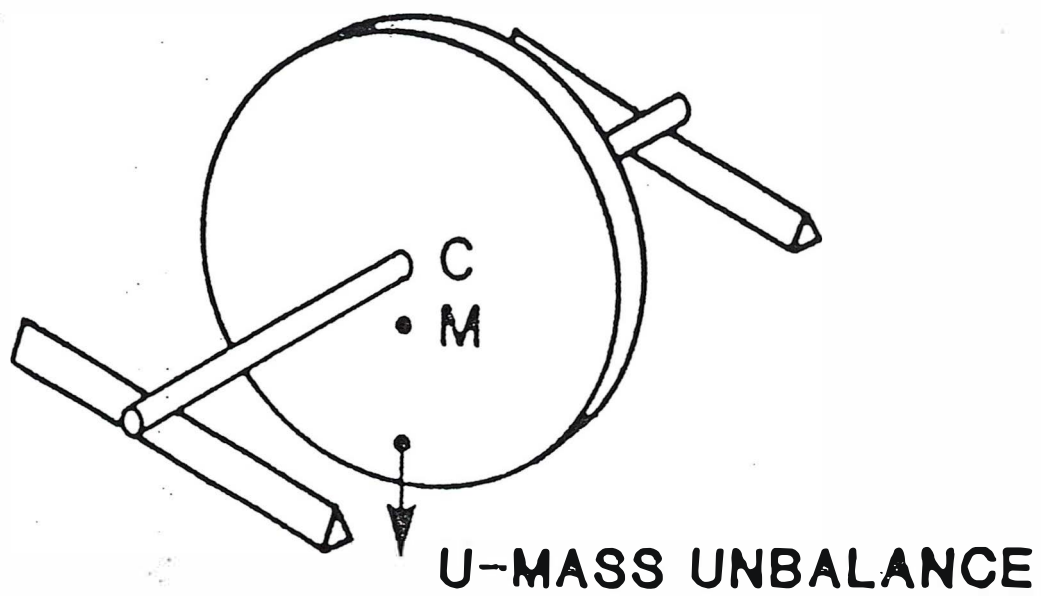
It is also of interest to evaluate the force exerted on the shaft by the unbalance. Let the shaft rotate with angular velocity  $\omega$  rad/sec. The force exerted on a rigid shaft is

$$F_u = m e_u \omega^2 = \text{Unbalance Force} \quad (2.2-2)$$

where

$$M = W/g = \text{Rotor Mass}$$

$$\omega = \text{Shaft Angular Velocity (rad/sec)}$$



**Figure 2.3 Single-Mass Jeffcott Rotor Supported on Knife Edges  
Showing Static Equilibrium Positions**

This force rotates with the shaft. Normally  $N$  is used to denote shaft speed in RPM.

### **Example 2.2** *Rotor Unbalance Eccentricity and Force*

**Given:** A rotor mass has an unbalance of

$$U = 10 \text{ oz-in } (7.064 \text{ N-mm})$$

and a weight of

$$W = 500 \text{ lbf } (2,225 \text{ N})$$

The rotor speed is  $N = 8,000 \text{ RPM}$ .

**Objective:** Find the unbalance eccentricity  $e_u$ , shaft angular velocity  $\omega$  and rotating force on a rigid rotor  $F_u$ .

**Solution:** The unbalance response eccentricity is (2.2)

$$\begin{aligned} e_u &= U/W = 10 \text{ oz-in} \times 1 \text{ lbf}/16 \text{ oz} \times 1500 \text{ lbf} \\ e_u &= 0.00125 \text{ in} = 1.25 \text{ mils } (0.0318 \text{ mm}) \end{aligned}$$

The rotor mass is

$$\begin{aligned} m &= W/g = 500 \text{ lbf} \times \frac{1}{386} \frac{\text{sec}^2}{\text{in}} \\ m &= 1.295 \frac{\text{lbf-sec}^2}{\text{in}} \quad (227 \text{ kg}) \end{aligned}$$

The angular velocity is

$$\omega = \frac{N}{60} \frac{2\pi}{\text{rev}} = 8,000 \text{ rev/min} \times \text{min}/60 \text{ sec} \times 6.28 \text{ rad/rev} = 837.7 \text{ rad/sec}$$

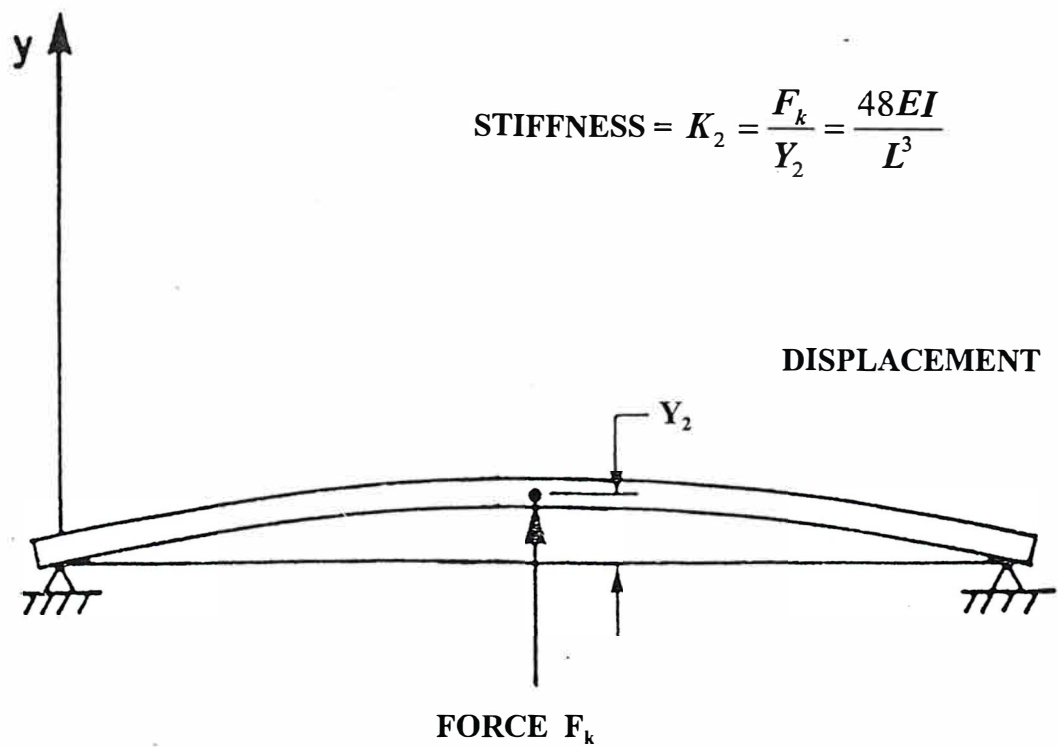
and the force  $F_u$  is (2.3)

$$\begin{aligned} F_u &= m e_u \omega^2 = 1.295 \times 0.00125 \times (837.7)^2 \\ F_u &= 1,135 \text{ lbf } (5050 \text{ N}) \end{aligned}$$

It is easily seen that the rotating unbalance force can be quite large.

### **2.3** *Shaft Stiffness*

The shaft exerts a force  $F_k$  on the mass displaces an amount  $Y_2$  as shown in Fig. 2.4. From



**Figure 2.4 Force and Displacement of Uniform Shaft in Bending**

uniform beam theory on pinned supports, the displacement is related to the force by

$$Y_2 = -48EI/L^3 F_k \quad (2.3-1)$$

where

$E$  = Young's Modulus

$I$  = Area Moment of Inertia

$L$  = Length Between Bearings

The shaft is circular with diameter  $D$

$D$  = Shaft Diameter

and the area moment of inertia is then

$$I = \pi D^4 / 64 \quad (2.3-2)$$

again from elementary theory. The shaft stiffness  $K_2$  is given by

$$K_2 = \text{Shaft Stiffness} = -F_k / Y_2 = -\text{Force} / \text{Displacement}$$

or from (2.2-1)

$$K_2 = 48EI/L^3 \quad (2.3-3)$$

This is easily calculated for a particular shaft.

As indicated in the introduction, rotating machinery which is centrally mounted between the bearings and reasonably uniformly distributed along the shaft may also be modeled with this formula for stiffness. Figure 2.5 shows a six-stage compressor which will be used as an example.

### **Example 2.3 Stiffness of Six-Stage Compressor**

**Given:** A six-stage compressor, shown in Fig. 2.5, has all of the stages located between the bearings and is fairly uniform along the shaft. The rotor has the properties

$$D = 159 \text{ mm (6.25 in)}$$

$$L = 1.72 \text{ m (67.8 in)}$$

$$E = 207,000 \text{ N/mm}^2 (3 \times 10^7 \text{ lbf/in}^2)$$

Here, the effective diameter is taken as the average of the diameter at the bearings, 4.5 inches, and the largest shaft diameter of 8.0 inches. The shaft is made of steel. The total shaft length is 2.23 m (87.7 in).

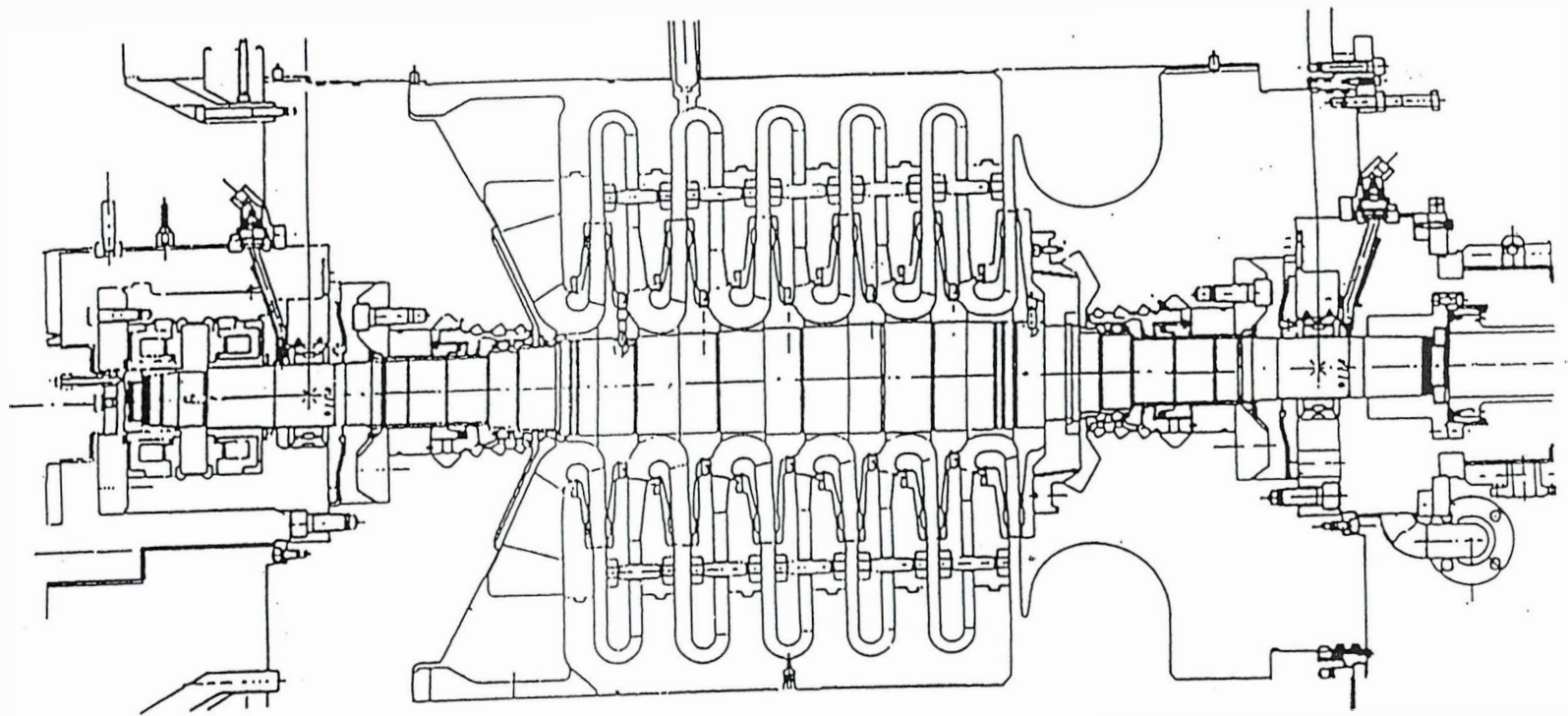
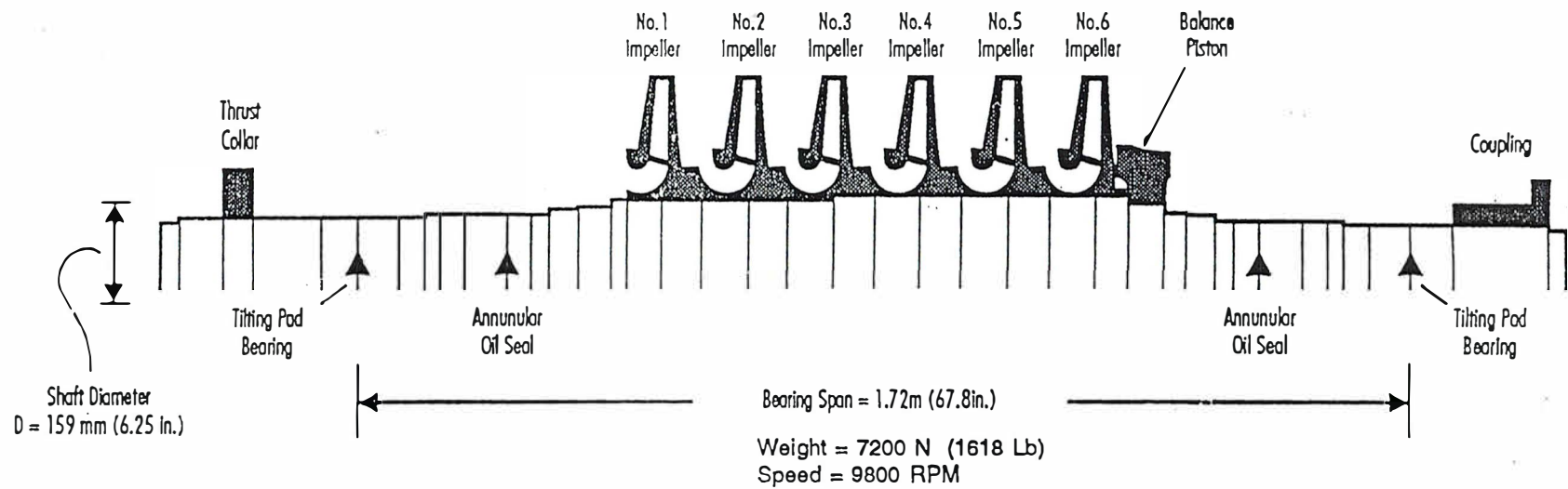


Figure 2.5 Shaft Parameters and Geometry For Six-Stage Compressor

Figure 2.6 Schematic Drawing of Six-Stage Compressor



Shaft Parameters and Geometry for Six Stage Compressor

**Objective:** Determine the shaft stiffness  $K_2$ .

**Solution:** The area moment of inertia is from (2.5)

$$I = \pi D^4/64 = 3.14 \times (159)^4 \text{ mm}^4 \times 1/64$$

$$I = 3.12 \times 10^7 \text{ mm}^4 (74.9 \text{ in}^4)$$

The shaft stiffness is (2.6)

$$K_2 = 48EI/L^3 = 48 \times 2.07 \times 10^5 \text{ N/mm}^2 \times 3.12 \times 10^7 \text{ mm}^4 \times 1/(1720)^3$$

$$K_2 = 60,900 \text{ N/mm} (348,000 \text{ lbf/in})$$

## 2.4 Rotor Mass

For a single mass rotor constructed of a disk, the mass is quite easy to obtain from the disk weight  $W$  as

$$M = W/g$$

Normally the shaft is assumed to have a small mass compared to the disk and that is neglected.

For centrally mounted industrial rotors, the mass used is called the modal mass

$$M_m = \text{Rotor Modal Mass}$$

It is a quantity defined in a somewhat complicated manner and normally calculated by a rotor dynamics computer program such as *CRITSPD-PC*. The modal mass for centrally mounted rotors is often found to be approximately 0.55 to 0.65 of the total rotor weight. For example, the modal weight for a uniform beam on simple supports is exactly 0.5  $W$  total.

Let

$$M_m = 0.5 W/g \quad (2.4-1)$$

This will be employed as a reasonable approximation in these notes. The factor of one-half represents the fact that the rotor center mass vibrates but that the ends do not vibrate very much.

Another useful quantity is the modal weight

$$W_m = \text{Modal Weight}$$

The approximate formula is

$$W_m = 0.5 W \quad (2.4-2)$$

where  $W$  is the total rotor weight.

### **Example 2.4 Modal Mass and Weight of Six-Stage Compressor**

**Given:** The total rotor weight is

$$W = 7200 \text{ N (1618 lbf)}$$

**Objective:** Find the modal mass and weight.

**Solution:** The modal weight from (2.7) is

$$\begin{aligned} m_m &= 0.5 W/g = 0.5 \times 7200 \text{ N} \times 1/9.8 \text{ sec}^2/\text{m} \times \text{kg-m/N-sec}^2 \\ m_m &= 367 \text{ kg} \end{aligned}$$

Similarly, the modal weight from (2.8) is

$$W_m = 0.5 W = 3600 \text{ N (809 lbf)}$$

### **2.5 Rotor Damping**

There is always a certain amount of damping present in any rotating machine. In this analysis, it is assumed that the damping force  $F_d$  is proportional to the rotor velocity  $\dot{Y}_2$ .

$$F_d = C_2 \dot{Y}_2 \quad (2.5-1)$$

where

$$C_2 = \text{Rotor Damping}$$

Usually, the rotor damping is fairly small compared to bearing damping.

### **2.6 Rotor Equations**

Consider the case of a single mass rotor on rigid supports, as shown in Fig. 2.1. It is assumed that the shaft mass is negligible and that shaft properties are the same in both x and y directions. Then the equations of motion can be written as

$$m\ddot{X}_2 + C_2\dot{X}_2 + K_2X_2 = me_u\omega^2 \cos \omega t \quad (2.6-1)$$

$$m\ddot{Y}_2 + C_2\dot{Y}_2 + K_2Y_2 = me_u\omega^2 \sin \omega t \quad (2.6-2)$$

The mass, damping, and stiffness forces on the left must equal the external unbalance forces on the right. Recall that the rotor reference mark is assumed to be aligned with the unbalance, so that there is no phase angle in the unbalance force terms.

With the complex rotor displacement defined in (2.1), these equations combine to yield

$$m\ddot{Z}_2 + C_2 \dot{Z}_2 + K_2 Z_2 = m e_u \omega^2 e^{i\omega t} \quad (2.6-3)$$

Now the critical speeds and unbalance response can be evaluated.

## 2.7 Undamped and Damped Critical Speeds

### A. Frequency Equation

First consider free vibrations where the external forces (unbalance) are zero. The critical speeds are

$$\begin{aligned} \omega_{cr} &= \text{Undamped Critical Speed} \\ \omega_{dr} &= \text{Damped Critical Speed} \end{aligned}$$

Here the "r" denotes rigid bearings. Set the forcing term on the right side of (2.12) to zero

$$m_2 \ddot{Z}_2 + C_2 \dot{Z}_2 + K_2 Z_2 = 0 \quad (2.7-1)$$

Assume a solution of the form

$$Z_2 = Z_2 e^{\lambda t}$$

where

$$\begin{aligned} Z_2 &= \text{Complex Amplitude} \\ \lambda &= \text{Eigenvalue (Critical Speed)} \end{aligned}$$

Then (2.13) reduces to

$$(m\lambda^2 + C_2\lambda + K_2) Z_2 = 0$$

A solution, other than the trivial solution of  $Z_2 = 0$ , exists only if the expression in brackets vanishes so

$$m\lambda^2 + C_2\lambda + K_2 = 0$$

This is called the **frequency equation**. The solution to the frequency equation is

$$\lambda = -\frac{C_2}{2m} \pm \sqrt{\left(\frac{C_2}{2m}\right)^2 - \left(\frac{K_2}{m}\right)} \quad (2.7-2)$$

There are two eigenvalues.

### 2.7.2. Undamped Eigenvalues

Now consider the undamped critical speeds. If the rotor is undamped,  $C_2=0$  and the eigenvalues become

$$\lambda = \pm i \sqrt{\frac{K_2}{m}} \quad (2.7-3)$$

Both eigenvalues are purely imaginary. Define the undamped critical speed as

$$\omega_{cr} = \sqrt{\frac{K_2}{m}} \quad (2.7-4)$$

The eigenvalues are then called forward and backward

$$\begin{aligned} \lambda_1 &= + i \omega_{cr} = \textit{Forward Undamped Critical Speed} \\ \lambda_2 &= - i \omega_{cr} = \textit{Backward Undamped Critical Speed} \end{aligned}$$

Usually only the forward eigenvalue is important for rotor dynamics. Normally it is desired to have the critical speeds at least 15 % away from the machine operating speed range.

The undamped critical speed on rigid bearings is often expressed in terms of the modal weight  $W_m$  from Eq. (2.8) as

$$\omega_{cr} = \sqrt{\frac{K_2 g}{W_m}} \quad (2.7-5)$$

Note that this does not take into account bearing stiffness, which may substantially reduce the actual critical speed.

For rotating machines, it is desired to not have a critical speed in the operating speed range. Let the critical speed margin be

$$\begin{aligned} \lambda_{margin} &= \textit{Critical Speed Margin} = | \lambda_{op} - \lambda_{cr} | \\ \text{where} \quad \lambda_{op} &= \textit{Operating Speed} \end{aligned}$$

A good estimate of the value for the critical speed margin is

$$\lambda_{margin} \geq 0.015 \lambda_{cr}$$

or 15% of the critical speed. Thus the critical speed should be either 15% below the lowest machine operating speed or 15% above the highest machine operating speed.

**Example 2.5 Undamped Critical Speed of Six-Stage Compressor**

**Given:** Consider the same six-stage compressor as in Examples 2.3 and 2.4. The rotor stiffness and modal weights were calculated in these examples as

$$K_2 = 60,900 \text{ N/mm (348,000 lbf/in)}$$

$$W_m = 3600 \text{ N (809 lbf)}$$

The compressor operating speed is

$$\lambda_{op} = 9800 \text{ RPM}$$

**Objective:** Find the undamped critical speed and compare to the measured critical speed (peak response). Also find the critical speed margin.

**Solution:** Eq. (2.18) gives the undamped critical as

$$\omega_{cr} = \sqrt{\frac{K_2 g}{W_m}} = \left[ 60,900 \frac{N}{mm} \times 9800 \frac{mm}{sec^2} \times \frac{1}{3600N} \right]^{1/2}$$

with the result

$$\omega_{cr} = 407 \text{ rad/sec}$$

Converting to revolutions per minute ( $N_{cr}$ )

$$N_{cr} = 407 \text{ rad/sec} \times 60 \text{ sec/min} \times 1/6.28 \text{ rev/rad}$$

$$N_{cr} = 3890 \text{ rpm}$$

Figure 2.6 shows the vibration test results for the six-stage compressor. The critical speeds are

Calculated Undamped Critical Speed	Measured Peak Response Speed
3890 rpm	3700 rpm

The calculated undamped critical is about 6% over the measured value.

(Now the calculated critical speed will be used to determine the critical speed margin. Eq. (2.7-6) gives

$$| \omega_{op} - \omega_{cr} | = | 9800 - 3890 \quad (2.7-6)$$

Measured Vibration Response at Probe 1  
For Six Stage Compressor During Rundown

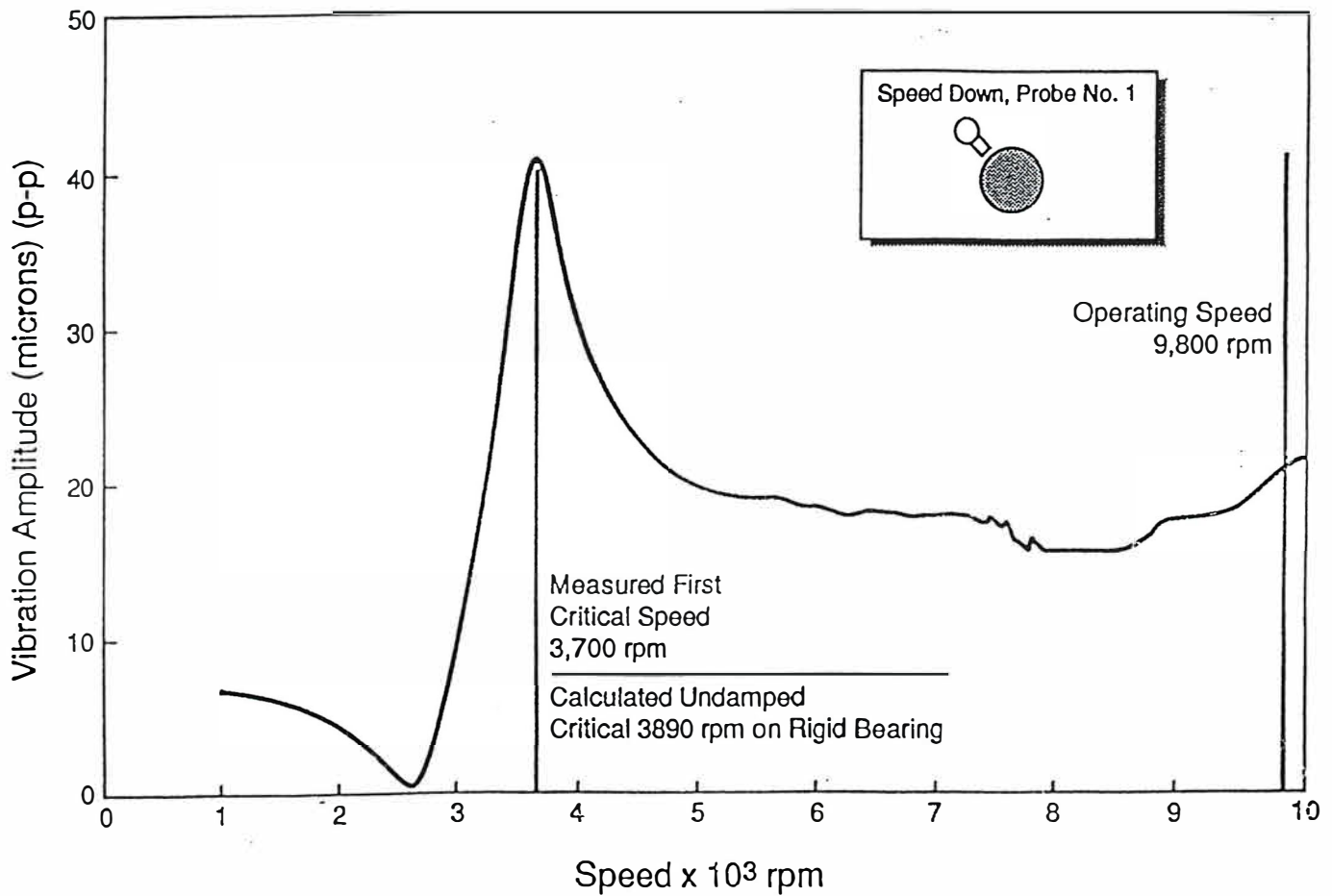


Figure 2.6 Measured Vibration Response at Probe 1 for  
Six-Stage Compressor During Run Down With Shaft Bow and Unbalance

and a margin of 160%. Clearly there is no critical speed problem with this compressor for the first critical speed.

### 2.7.3. Damped Eigenvalues

Next consider the damped critical speeds. For convenience, define the damping ratio  $\xi_2$

$$\xi_2 = \text{Damping Ratio}$$

in the standard manner for vibrations as

$$\xi_2 = \frac{C_2}{2\sqrt{K_2 m}} = \frac{C_2}{2m\omega_{cr}} \quad (2.7-7)$$

The damped eigenvalues are

$$\lambda_1 = -\xi_2\omega_{cr} \pm i\omega_{cr}\sqrt{1-\xi_2^2} \quad (2.7-8)$$

If the damping ratio  $\xi_2$  is one, the rotor is critically damped, and no oscillations take place. For an industrial rotor it is usually desired to have damping ratio of 0.10 or more near a critical speed.

The two damped eigenvalues have the form

$$\lambda_1 = p + i\omega_{dr} = \text{Forward Damped Eigenvalue}$$

$$\lambda_2 = p - i\omega_{dr} = \text{Backward Damped Eigenvalue}$$

where

$$p = -C_2/2m_2 = -\omega_{cr}\xi_2 = \text{Growth Factor} \quad (2.7-9)$$

$$\omega_{dr} = \omega_{cr}\sqrt{1-\xi_2^2} = \text{Damped Eigenvalue} \quad (2.7-10)$$

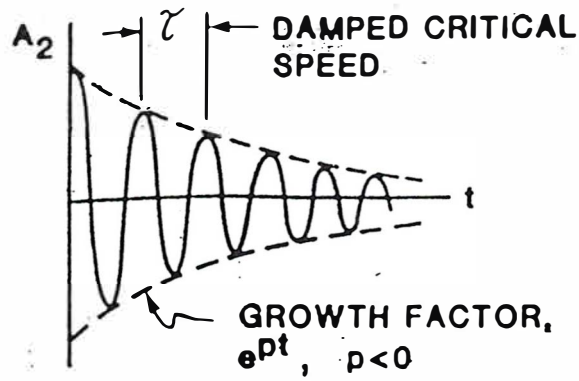
The growth factor,  $p$ , determines whether the vibration will grow with time, be constant, or decrease with time.

$p > 0$ , Increasing Vibration - unstable system

$p = 0$ , Constant Vibration - undamped system on threshold of instability

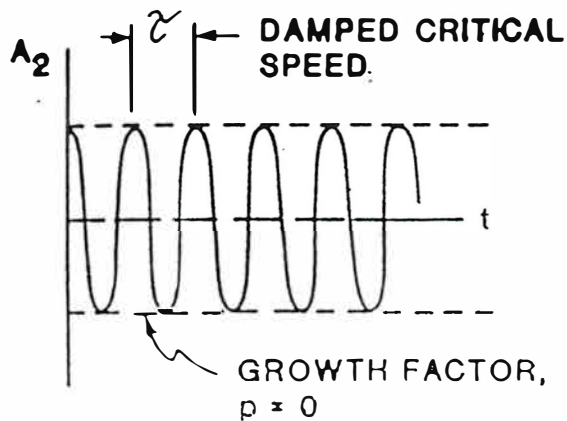
$p < 0$ , Decreasing Vibration - damped system - stable

Figure 2.7 represents the rotor transient motion with stable, neutral, and unstable values of  $p$ .



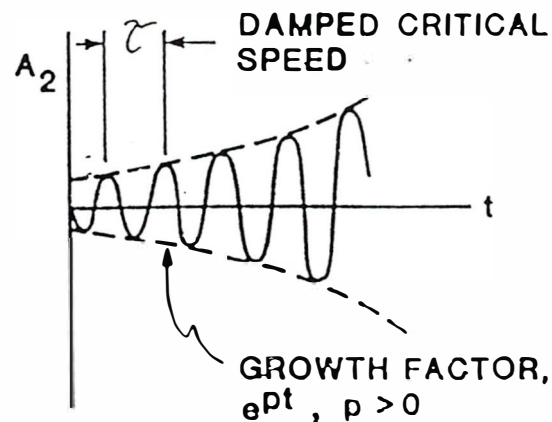
LOGARITHMIC  
DECREMENT  
 $\delta > 0$

(a) STABLE MOTION: AMPLITUDE DECAYS WITH TIME



LOGARITHMIC  
DECREMENT  
 $\delta = 0$

(b) INSTABILITY THRESHOLD: AMPLITUDE NEITHER DECAYS  
NOR GROWS WITH TIME



LOGARITHMIC  
DECREMENT  
 $\delta < 0$

(c) UNSTABLE MOTION: AMPLITUDE GROWS WITH TIME

Figure 2.7 Vibration Pattern with Damped Critical Speeds

The damped critical speed is slightly less than the undamped critical speed. Again, only the forward eigenvalue is normally observed in rotor dynamic vibrations.

Recall that the assumed form of the vibration is

$$\mathbf{Z}_2 = Z_2 e^{\lambda t} = Z_2 e^{pt \pm i \omega t} \quad (2.7-11)$$

In sinusoidal form this is

$$\mathbf{Z}_2 = Z_2 e^{pt} (\cos \omega_{dr} t \pm i \sin \omega_{dr} t)$$

Figure 2.7 illustrates the vibration patterns. The period of the damped oscillation is

$$\tau = 2 \pi / \omega_{dr} = \text{Period} \quad (2.7-12)$$

These results are well known for free vibrations.

#### 2.7.4 Logarithmic Decrement

Another useful quantity used in rotor dynamics is the logarithmic decrement

$$\delta = \text{Logarithmic Decrement}$$

It is defined as the natural logarithm of the ratio of any two successive amplitudes.

$$\delta = \ln \frac{|Z_2|_t}{|Z_2|_{t+\tau}} \quad (2.7-13)$$

Vibration texts show that this can also be expressed as

$$\delta = - \frac{2 \pi p}{\omega_{dr}}$$

It represents a dimensionless measure of the rotor vibration decreasing with time. Eqs. (2.7-9) and (2.7-10) give expressions for  $p$  and  $\omega_{dr}$

$$\delta = - \frac{2 \pi (-\omega_{cr} \xi_2)}{\omega_{cr} \sqrt{1 - \xi_2^2}}$$

with the result

$$\delta = 2\pi \frac{\xi_2}{\sqrt{1 - \xi_2^2}} \quad (2.7-14)$$

Often  $\xi_2$  is small, so the log decrement may be approximated as

$$\delta = 2\pi \xi_2 \quad (2.7-15)$$

for rotors operating near or above the first bending critical speed. The rotor amplification factor at the critical speed is given by

$$A_c = \frac{1}{2\xi_2} = \frac{\pi}{\delta}$$

for small values of the log decrement.

A damping ratio of  $\xi_2 = 0.10$  correspond to a logarithmic decrement value of  $\delta = 0.628$  near a critical speed and an amplification factor of 5. This corresponds to a ratio of successive amplitudes equal to 0.534. Note that for industrial rotating machine vibration analyses, this value must include all important effects such as bearings, seals, and so on.

### 2.7.5 Summary Tables

A summary of the important parameters for undamped and damped critical speeds (eigenvalues) is presented in Table 2.1. These may be used to model some centrally mounted turbomachines. Table 2.2 gives desirable values of a single mass rotor parameters for low vibration levels.

#### **Example 2.6** *Damped Critical Speed of Six-Stage Compressor*

**Given:** The six-stage compressor of several previous examples is assumed to have a rotor damping coefficient of

$$C_2 = 4.0 \text{ N-sec/mm (22.8 lbf-sec/in)}$$

As noted, the rotor damping is quite small for rotating machines, so this value is considered typical. Most of the damping comes from the bearings, as will be seen in a later example in the next section.

**Table 2.1 Undamped and Damped Critical Speeds For Single Mass Rotor On Rigid Bearings**

**I. Undamped Critical Speeds - Eigenvalues**

$$\lambda_1 = + i \omega_{cr} \quad , \quad \lambda_2 = - i \omega_{cr}$$

$$\omega_{cr} = \sqrt{K_2/m} = \text{Undamped Critical Speed}$$

**II. Damped Critical Speeds - Eigenvalues**

$$\lambda_1 = p + i \omega_{dr} \quad , \quad \lambda_2 = p - i \omega_{dr}$$

$$p = - \omega_{cr} \xi_2 = \text{Growth Factor}$$

$$\omega_{dr} = \omega_{cr} \sqrt{1 - \xi_2^2} = \text{Damped Critical Speed}$$

$$\xi_2 = C_2 / 2 m \omega_{cr} = \text{Damping Ratio}$$

$$\delta = - 2 \pi p / \omega_{dr} = 2 \pi \xi_2 = \text{Logarithmic Decrement}$$

**Table 2.2 Desirable Rotor Dynamic Properties Near Critical Speeds For A Single Mass Rotor on Rigid Bearings**

**I. Undamped Critical Speeds**

$$\frac{\omega_{margin}}{\omega_{cr}} \geq 15\% \quad (\text{Operating Speed 15\% Away From Critical Speed})$$

**II. Damped Critical Speeds**

$$\xi_2 \geq 0.10 \quad (\text{Damping Ratio Greater Than 0.10}), \quad A_c \leq \frac{1}{2 \xi_2} = 5$$

$$\delta \geq 0.628 \quad (\text{Logarithmic Decrement Greater Than 0.628}), \quad A_c \leq \frac{\pi}{\delta}$$

**Objective:** Determine the damping ratio  $\xi_2$ , growth factor  $p$ , damped critical speed  $\omega_{dr}$ , damped eigenvalues  $\lambda_1$  and  $\lambda_2$ , and the logarithmic decrement  $\delta$  for this compressor.

**Solution:** The damping ratio  $\xi_2$  is given by Eq. (2.20) as

$$\xi_2 = \frac{C_2}{2m \omega_{cr}} = 4.0 \frac{N\text{-sec}}{mm} \times \frac{1}{2} \times \frac{1}{367 \text{ kg}} \times \frac{1}{407 \text{ rad}} \frac{\text{sec}}{\text{rad}} \times \frac{\text{kg-m}}{N\text{-sec}^2} \times \frac{1000 \text{ mm}}{m}$$

with the result

$$\xi_2 = 0.013$$

This is a very low value of damping ratio.

Evaluating the growth factor  $p$  and damped critical speeds  $\omega_{dr}$  from Eqs. (2.22) and (2.23) yields

$$\begin{aligned} p &= -\omega_{cr} \xi_2 = -407 \text{ rad/sec} \times 0.013 = -5.5 \text{ rad/sec} \\ \omega_{dr} &= \omega_{cr} \sqrt{1 - \xi_2^2} = 407 \text{ rad/sec} \times \sqrt{1 - (0.013)^2} \\ &= 407 \text{ rad/sec} = 3,890 \text{ rpm} \end{aligned}$$

The damped critical speed is equal to the undamped critical speed to three decimal places. The damped eigenvalues are

$$\lambda_1 = -5.5 + i 407 \quad , \quad \lambda_2 = -5.5 - i 407$$

for this compressor.

The logarithmic decrement is given by Eq. (2.28) as

$$\delta = 2 \pi \xi_2 = 6.28 (0.013) = 0.083$$

It is small, as expected.

## 2.8 Unbalance Response

### 2.8.1 Vibration Amplitude and Phase Angle

Now consider the forced vibration of the rotor due to unbalance. Recall that the single mass rotor on rigid bearings has the rotor mass  $M_2$  at an eccentricity  $e_u$  away from the geometric center. The equation (2.6-3)

$$m \ddot{Z}_2 + C_2 \dot{Z}_2 + K_2 Z_2 = m e_u \omega^2 e^{i\omega t} \quad (2.8-1)$$

The unbalance term on the right produced forced, rather than free vibration.

Assume a solution of the form

$$Z_2 = Z_2 e^{i\omega t}$$

where

$$\begin{aligned} Z_2 &= \text{Complex Amplitude} \\ \omega &= \text{Shaft Angular Velocity} \end{aligned}$$

Then the equation becomes

$$(-m \omega^2 + i C_2 \omega + K_2) Z_2 = m e_u \omega^2 \quad (2.8-2)$$

where the exponential term has been canceled from both sides.

Solving for  $Z_2$  yields

$$Z_2 = \frac{m e_u \omega^2}{K_2 - m \omega^2 + i C_2 \omega} \quad (2.8-3)$$

This is the desired unbalance response amplitude. A more convenient form can be found.

Define the frequency ratio  $f$  as

$$f = \omega/\omega_{cr} = \text{Frequency Ratio}$$

The dimensionless amplitude is

$$\frac{Z_2}{e_u} = \frac{f^2}{1 - f^2 + i 2f\xi_2} \quad (2.8-4)$$

Also, the absolute amplitude  $A_2$  is

$$A_2 = |Z_2| = \text{Absolute Amplitude}$$

Evaluating the magnitude of Equation (2.32) produces

$$\frac{A_2}{e_u} = \frac{f^2}{\left[ (1 - f^2)^2 + 4 \xi_2^2 f^2 \right]^{1/2}} \quad (2.8-5)$$

This is the dimensionless disk amplitude of motion as a function of  $f$  and  $\xi_2$ . The phase angle  $\phi_2$  is

$\phi_2$  = Phase Angle of Shaft Motion Relative to the Reference Mark

Evaluating the phase angle from Equation (2.32) yields

$$\phi_2 = \arctan \left[ \frac{2f\xi_2}{1 - f^2} \right] \quad (2.8-6)$$

These are two very important parameters.

### 2.8.2 Unbalance Response Plots

Figure 2.8 plots the amplitude ratio  $A_2/e_u$  vs. frequency ratio  $f$  for various values of rotor damping ratio  $\xi_2$ . Damping ratios above 0.5 represent sinusoidally varying vibrations while those below are critically damped.

$\xi_2 < 0.5$	Sinusoidal Oscillations
$\xi_2 = 0.5$	Critically Damped
$\xi_2 > 0.5$	Over Damped

For industrial rotors operating above the first critical speed, damping ratios are usually in the range of 0.0625 to 0.5.

The corresponding phase angles  $\phi_2$  vs. frequency ratio  $f$  are shown in Fig. 2.9. All damping ratios give a phase angle of  $90^\circ$  at a frequency ratio of unity. However, as the damping ratio increases, the change in phase angle is more rapid as the rotor goes through the critical speed.

### 2.8.3 Peak Vibration

At the peak of the vibration due to unbalance, the frequency ratio  $f$  is close to unity

$$f \approx 1.0, \quad \xi_2 < 0.2$$

for damping ratios  $\xi_2$  less than about 0.2. These are the vibration problems of interest for rotating machines so this will be taken as the case here. Then the amplitude and phase angle, from Eqs. (2.8-5) and (2.8-6), are

$$\left. \begin{array}{l} \frac{A_2}{e_u} \approx \frac{1}{2\xi_2} \\ \phi_2 \approx 90^\circ \end{array} \right\} \begin{array}{l} \text{At Peak Response} \\ \text{Speed } (f \approx 1, \xi_2 < 0.2) \end{array} \quad (2.8-7)$$

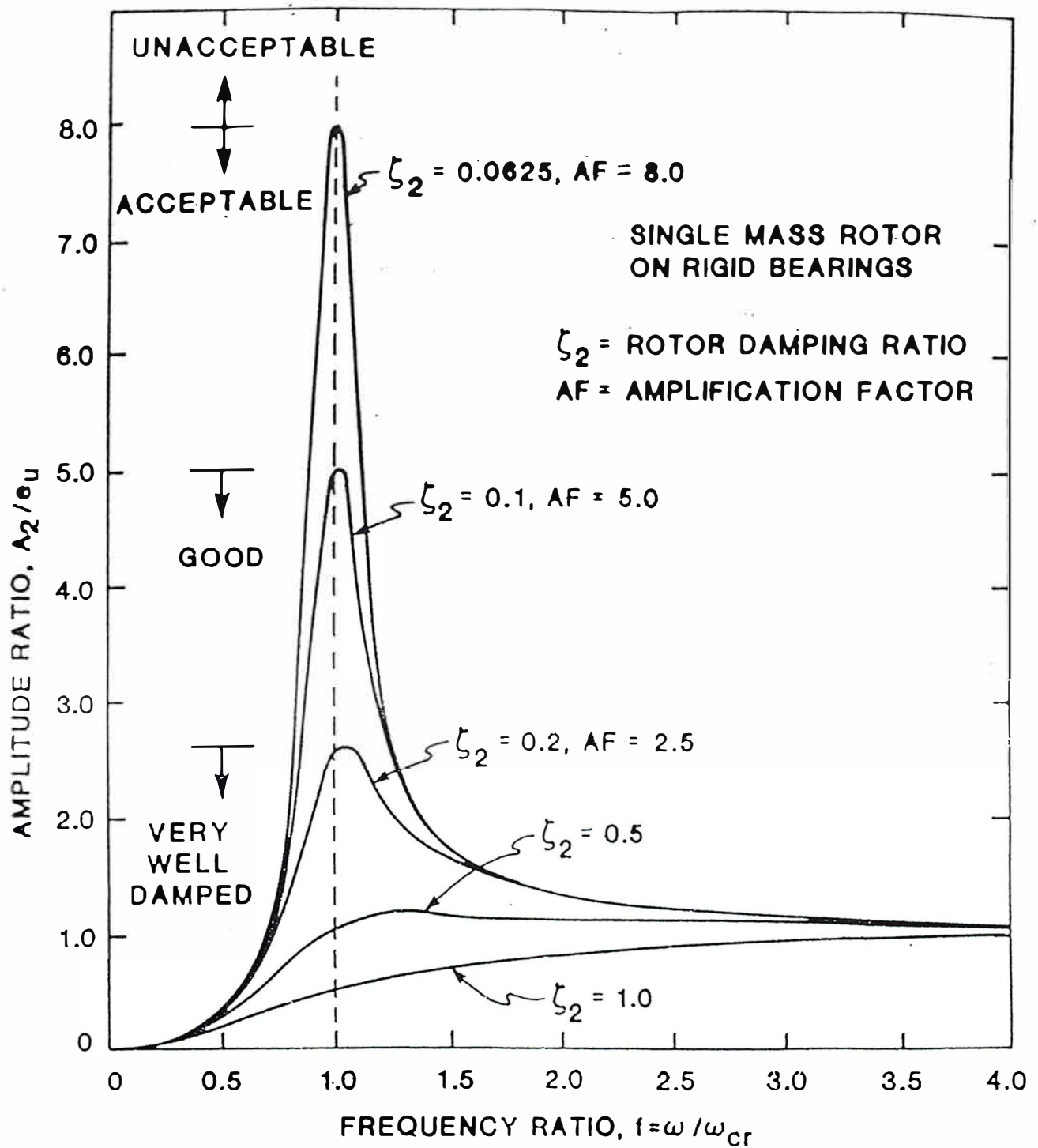


Figure 2.8 Jeffcott Rotor Dimensionless Amplitude vs. Frequency Ratio for Various Values of Rotor Damping  $\xi$

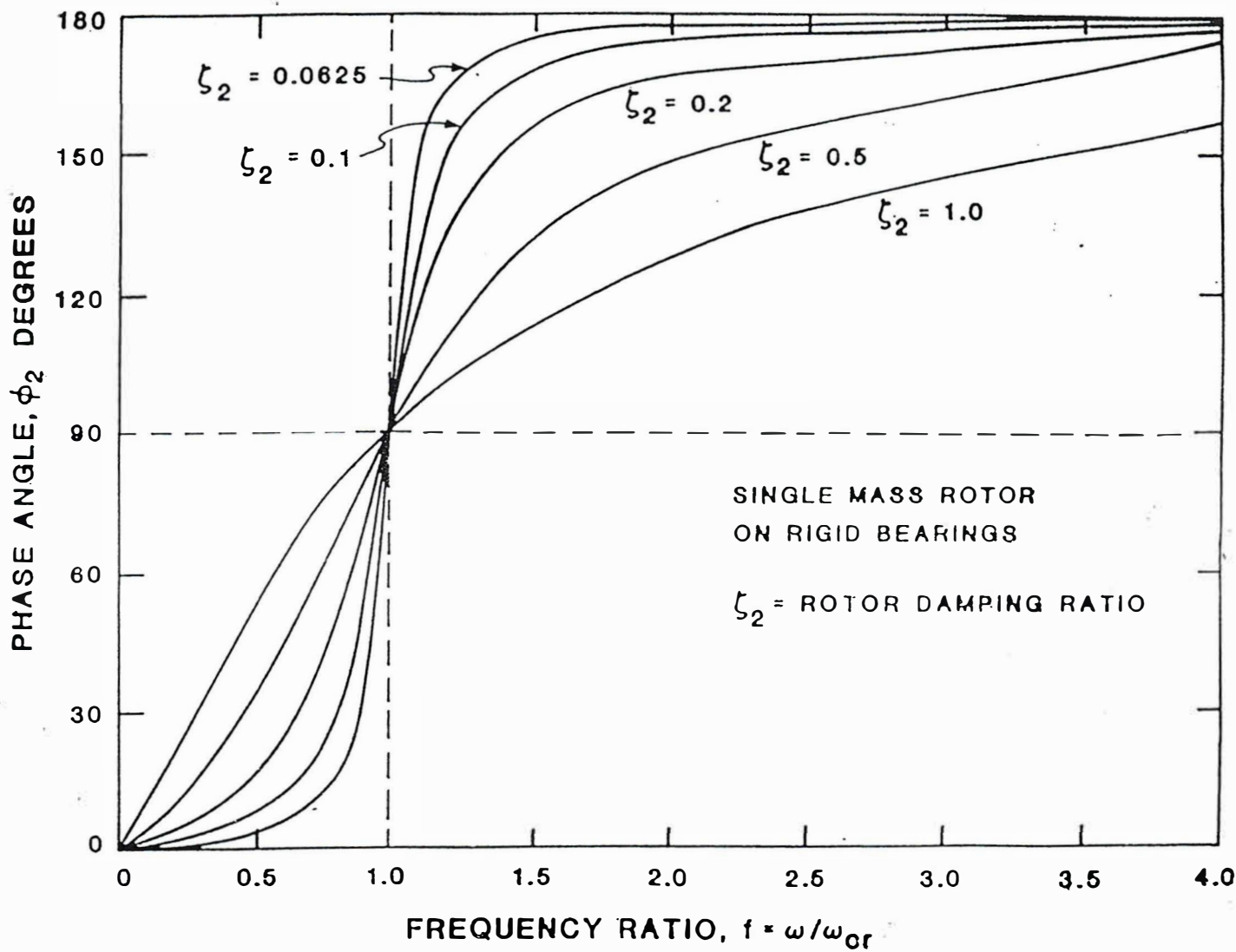


Figure 2.9 Jeffcott Rotor Phase vs. Frequency Ratio for Various Values of Rotor Damping  $\xi$

This is a rather good approximation for many industrial rotors.

The speed at which the peak response occurs  $\omega_{ur}$

$\omega_{ur}$  = Unbalance Critical Speed

can be found by differentiating Eq. (2.33)  $A_2/e_u$  with respect to  $f$  and setting it equal to zero. Solving for the speed yields

$$\omega_{ur} = \frac{\omega_{cr}}{\sqrt{1-2\xi_2^2}} \quad (2.8-8)$$

The unbalance critical speed occurs at values slightly higher than the undamped critical speeds.

#### 2.8.4 Sharpness of Resonance - Amplification Factor

An important parameter describing rotor unbalance response is the amplification factor  $A_c$

$A_c$  = Amplification Factor

It is a measure of the sharpness of the resonance and is often also called the Q factor.

$A_c = Q = Q \text{ Factor}$

This is a commonly employed measure in rotor dynamics so it will be discussed here in some detail.

For a single mass rotor, the amplification factor is defined as the peak response amplitude divided by the high speed response amplitude

These amplitudes are given by Eqs. (2.8-7) and (2.8-5)

$$\begin{aligned} \left( \frac{A_2}{e_u} \right)_{peak} &\cong \frac{1}{2\xi_2} \quad (\xi_2 < 0.2) \\ \left( \frac{A_2}{e_u} \right)_{high \ speed} &= 1 \end{aligned} \quad (2.8-9)$$

with the result

$$A_c = Q \approx \frac{1}{2\xi_2} \quad (\xi_2 < 0.2) \quad (2.8-10)$$

The amplification factor can either be defined in this manner or using the half power points for measured data as discussed in Section 4.

Some particular values for amplification factor have been found useful as guidelines. These are

$A_c > 8$	Undesirable
$8 \geq A_c > 5$	Acceptable
$5 \geq A_c > 2.5$	Good
$2.5 \geq A_c$	Very Well Damped

If  $A_c$  is greater than 8, the machine should either be redesigned or very carefully analyzed to determine if a problem exists. Amplification factors between 8 and 5 are generally considered acceptable. Below values of 5, the machine is considered very good. In the case of a rotor critical speed found to have an amplification factor below 2.5, it may often be assumed that the critical speed is so well damped it may even be in the machine operating speed range.

### 2.8.5 Summary Tables

Table 2.3 gives a summary of the important unbalance response parameters. Peak values are particularly important. Table 2.4 gives desirable rotor dynamic properties for the amplification factor. Note that these are for a single mass rotor on rigid bearings. Significant changes occur due to bearing effects as discussed in the next section.

#### Example 2.7 *Unbalance Response of Six-Stage Compressor*

**Given:** The six-stage compressor from previous examples has an unbalance level of

$$U = 10 \text{ N-mm (1.4 oz-in)}$$

acting at the rotor center.

**Objective:** Determine the amplitude ratio  $A_2/e_u$ , the unbalance eccentricity,  $e_u$ , rotor amplitude  $A_2$ , unbalance critical speed  $\omega_{ur}$ , and amplification factor  $A_c$ .

**Table 2.3 Unbalance Response For Single-Mass Jeffcott Rotor On Rigid Bearings**

**I. Unbalance Response**

$$A_{ur} = \frac{A_u}{e_u} = \frac{f^2}{[(1-f^2)^2 + 4\xi_2^2 f^2]^{1/2}} = \text{Amplitude Ratio}$$

**II. Peak Response**

$$A_{cM} = \frac{A_2}{e_u} = \frac{1}{2\xi_2} = \text{Amplitude Ratio At Peak}$$

$$\omega_{ur} = \frac{\omega_{cr}}{\sqrt{1 - 2\xi_2^2}} = \text{Unbalance Critical Speed}$$

**III. Amplification Factor**

$$A_c = Q \cong \frac{1}{2\xi_2} = \text{Amplification Factor}$$

**Table 2.4 Recommended Rotor Amplification Factors**

Amplification Factor $A_c = Q$	Category	Recommended Action
$A_c > 8$	Undesirable	Machine Redesign or Very Careful Analysis and Testing
$8 \geq A_c > 5$	Acceptable	Some Care Recommended - Insure Critical Speed Margin
$5 \geq A_c > 2.5$ Good		Insure Critical Speed Margin
$2.5 \geq A_c$	Very Well Damped	Not Considered Critical Speed

**Solution:** The amplitude ratio  $A_2/e_u$  given by Equation (2.8-7) at the peak is

$$\frac{A_2}{e_u} = \frac{1}{2\xi_2} = \frac{1}{2(0.013)} = 38$$

The unbalance eccentricity  $e_u$  is obtained from Equation (2.2)

$$e_u = \frac{U}{W_m} = 10 \text{ N-mm} \times \frac{1}{3600N} = 0.0028 \text{ mm}$$

$$e_u = 0.0028 \text{ mm} (1.1 \times 10^{-4} \text{ in})$$

where the modal weight is used. Then the predicted rotor amplitude at the mass is

$$A_2 = 38 e_u = 38 \times 0.0028 \text{ mm}$$

$$A_2 = 0.106 \text{ mm} (0.004 \text{ in}) (0\text{-pk})$$

This is much too large for acceptable compressor vibrations. As noted earlier, much of the damping comes from the bearings and these have yet to be included.

The unbalance critical speed is given by Equation (2.36) as

$$\omega_{ur} = \frac{\omega_{cr}}{\sqrt{1 - 2\xi_2^2}} = 407 \text{ rad/sec}$$

$$\times \frac{1}{\sqrt{1 - 2(0.013)^2}} = 407 \text{ rad/sec}$$

This is the same as the undamped critical speed due to the low damping.

Evaluating the amplification factor from Equation (2.38)

$$A_c = Q = \frac{1}{2\xi_2} = \frac{1}{2(0.013)} = 38$$

It is the same as the amplitude ratio at the peak.

Tables 2.5 and 2.6 summarize the results.

**Table 2.5 Summary Table of Six-Stage Compressor Properties**

**I. Shaft**

$D = 165 \text{ mm (6.5 in)} = \text{Diameter}$   
 $L = 1.80 \text{ M (71.1 in)} = \text{Bearing Span}$   
 $E = 207,000 \text{ N/mm (3 x } 10^7 \text{ lbf/in)} = \text{Young's Modulus}$   
 $K_2 = 60,900 \text{ N/mm (348,000 lbf/in)} = \text{Stiffness}$   
 $C_2 = 4.0 \text{ N-sec/mm (22.8 lbf-sec/in)} = \text{Shaft Damping}$

**II. Rotor Weight**

$W = 7200 \text{ N (1618 lbf)} = \text{Weight}$   
 $W_m = 3600 \text{ N (809 lbf)} = \text{Modal Weight}$

**III. Speed**

$\omega_{op} = 9800 \text{ rpm} = \text{Operating Speed}$

**Table 2.6 Summary of Rotor Dynamic Calculations for Six-Stage Compressor Using Single Mass Rotor on Rigid Bearings**

**I. Undamped Critical Speed**

$\omega_{cr} = 3800 \text{ rpm} = \text{Undamped Critical}$   
 $\omega_{op} = 9800 \text{ rpm} = \text{Operating Speed}$   
 $\text{Margin} = 149\%$

**II. Damped Critical Speed**

$p = -5.5 \text{ rad/sec} = \text{Growth Factor}$   
 $\omega_{dr} = 3890 \text{ rpm} = \text{Damped Critical}$   
 $\xi_2 = 0.013 = \text{Damping Factor}$   
 $\delta = 0.083 = \text{Logarithmic Decrement}$

**III. Unbalance Response**

$A_2/e_u = 38 = \text{Amplitude Ratio}$   
 $e_u = 0.0028 \text{ mm (1.1 x } 10^{-4} \text{ in)} = \text{Unbalance Eccentricity}$   
 $A_2 = 0.106 \text{ mm (0.0004 in)} (0\text{-pk}) = \text{Amplitude}$   
 $AF = Q = 38 = \text{Amplification Factor}$

## SECTION 3

### FLEXIBLE ROTOR ON FLEXIBLE BEARINGS

#### 3.1 Rotor and Bearing Equations

The previous case of a single-mass rotor on rigid bearings is now extended to the case of flexible bearings. Figure 3.1 shows the geometry of the rotor with the displacements

$X_1$  = Bearing Horizontal Displacement

$Y_1$  = Bearing Vertical Displacement

$X_2$  = Rotor Horizontal Displacement

$Y_2$  = Rotor Vertical Displacement

Again, complex displacements are used

$Z_1 = X_1 + iY_1$  (Bearing)

$Z_2 = X_2 + iY_2$  (Rotor)

where both rotor and bearing properties are assumed the same in both horizontal and vertical directions.

The bearing properties are defined as

$K_1 = 2K_b$  = Bearing Stiffness

$C_1 = 2C_b$  = Bearing Damping

Here,  $K_b$ ,  $C_b$  are the bearing properties for the total support. It is assumed here that the mass of the bearing housing is small and can be neglected.

The equations of motion are

#### Bearing

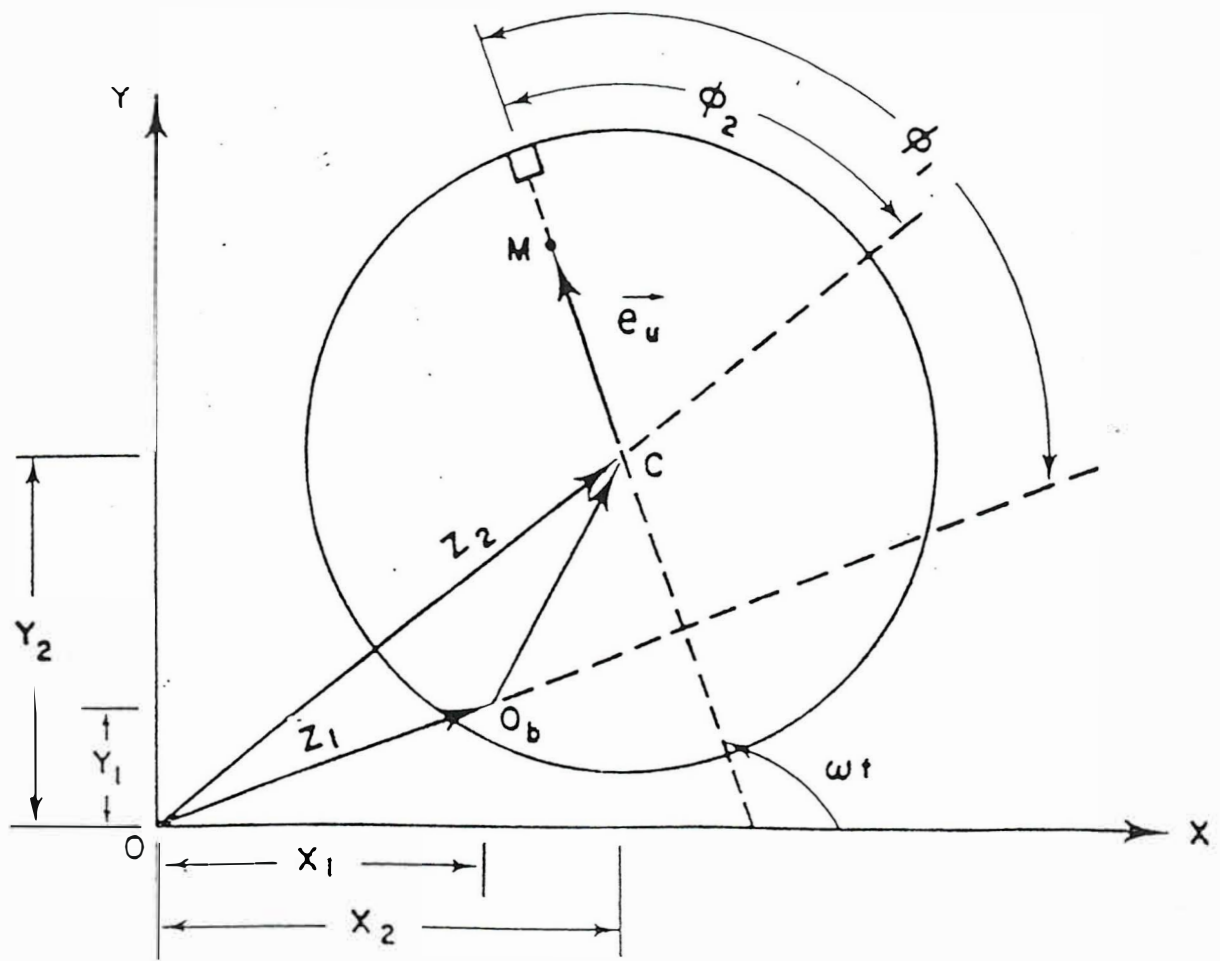
$$C_1 \dot{X}_1 + K_1 X_1 + K_2 (X_1 - X_2) = 0 \quad (3.1)$$

$$C_1 \dot{Y}_1 + K_1 Y_1 + K_2 (Y_1 - Y_2) = 0 \quad (3.2)$$

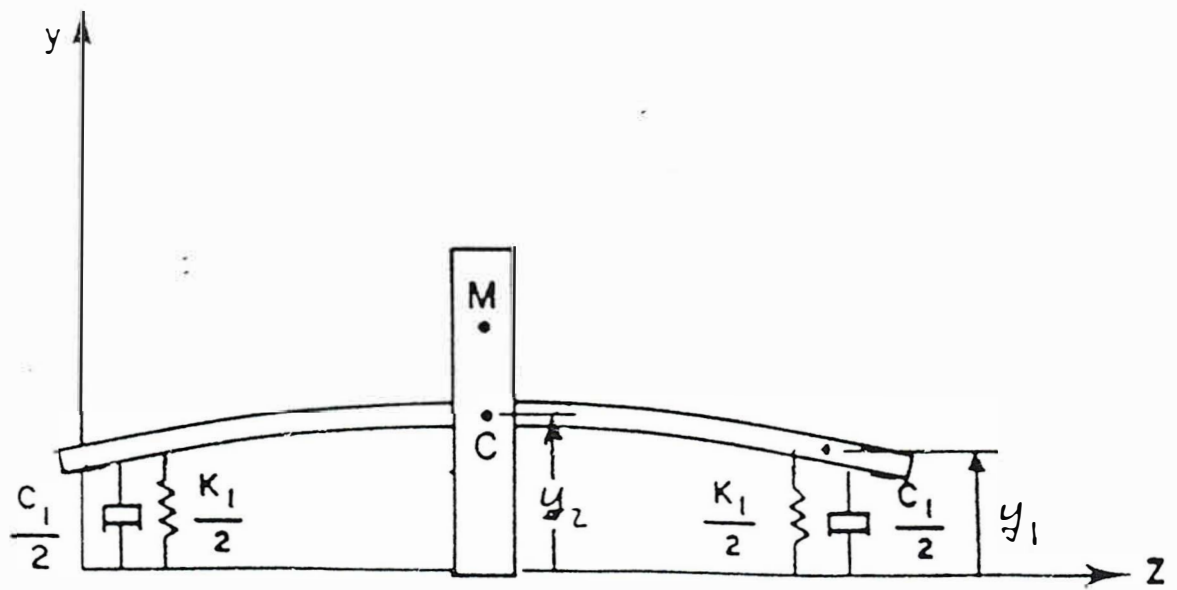
#### Shaft

$$m \ddot{X}_2 + K_2 (X_2 - X_1) = m e_u \omega^2 \cos \omega t \quad (3.3)$$

$$m \ddot{Y}_2 + K_2 (Y_2 - Y_1) = m e_u \omega^2 \sin \omega t \quad (3.4)$$




(a) End View of Rotor Mass



(b) Side View of Rotor Displacement

Figure 3.1 Single-Mass Rotor on Flexible Damped Bearings



SCHEMATIC REPRESENTATION OF MULTI-MASS TURBOROTOR

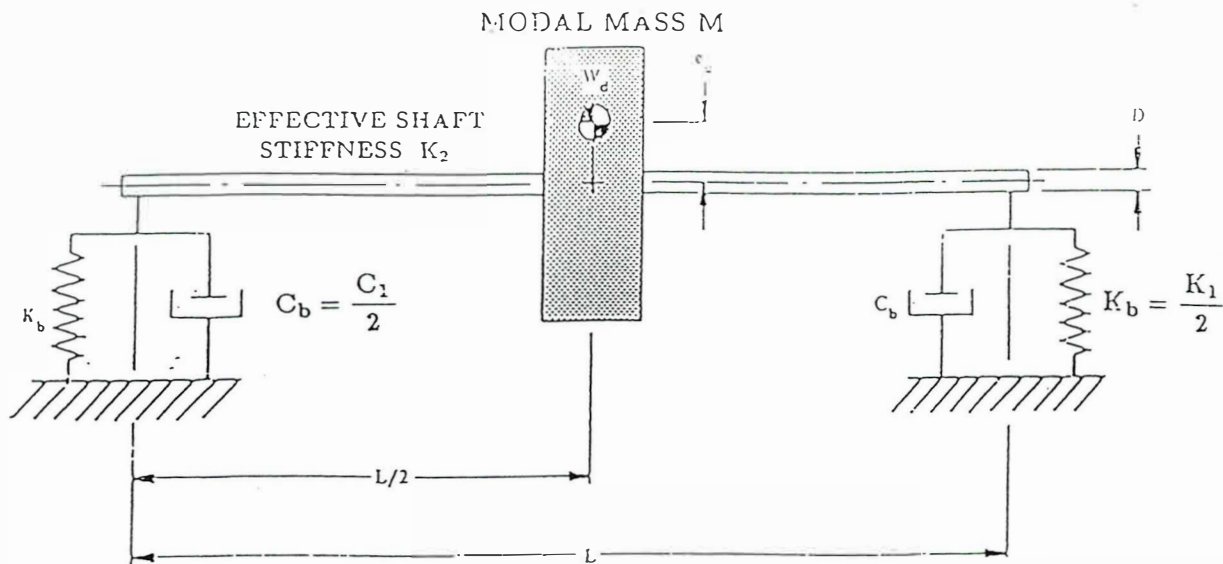


Figure 3.1b Single-Mass Rotor on Flexible Damped Bearings

Here, the unbalance is the same as in the previous section. It is located only on the rotor (disk) and is aligned with the reference mark, as shown in Fig. 3.1a. Here, it is also assumed that the rotor damping  $C_2$  is quite small compared to the bearing damping. Thus, it is neglected to simplify the analysis. In complex form, these equations are

$$C_1 \dot{Z}_1 + K_1 Z_1 + K_2 (Z_1 - Z_2) = 0 \quad (3.5)$$

$$m \ddot{Z}_2 + K_2 (Z_2 - Z_1) = m e_u \omega^2 e^{i\omega t} \quad (3.6)$$

Note that this is only possible if the bearing properties are equal (symmetric) in the X, Y directions.

### 3.2 Undamped and Damped Critical Speeds

#### A. Frequency Equation

Again, both undamped and damped critical speeds are examined.

$\omega_c$  = Undamped Critical Speed On Flexible Bearings

$\omega_d$  = Damped Critical Speed On Flexible Bearings

The “r” subscript is now dropped because the bearings are no longer rigid.

For free vibrations, the unbalance force terms on the right in Equations (3.5) and (3.6) are set to zero.

$$C_1 \dot{Z}_1 + K_1 Z_1 + K_2 (Z_1 - Z_2) = 0 \quad (3.7)$$

$$M \ddot{Z}_2 + K_2 (Z_2 - Z_1) = 0 \quad (3.8)$$

Assume a solution of the form

$$Z_1 = Z_1 e^{\lambda t} \quad , \quad Z_2 = Z_2 e^{\lambda t}$$

and the equations reduce to

$$(C_1 \lambda + K_1 + K_2) Z_1 - K_2 Z_2 = 0$$

$$(m \lambda^2 + K_2) Z_2 - K_2 Z_1 = 0$$

$$K = \frac{K_1}{K_2} = \frac{2K_b}{K_2} = \text{Bearing Stiffness Ratio}$$

Define the dimensionless parameters

$$\omega_{cr} = \sqrt{\frac{K_2}{m}} = \text{Undamped Critical Speed on Rigid Bearings}$$

$$\xi_1 = \frac{C_1}{2 m \omega_{cr}} = \frac{2C_b}{2m \omega_{cr}} = \text{Bearing Damping Ratio}$$

Rearranging with the result

$$\begin{aligned} [2 \xi_1 \omega_{cr} \lambda + (1 + K) \omega_{cr}^2] Z_1 - \omega_{cr}^2 Z_2 &= 0 \\ -\omega_{cr}^2 Z_1 + [\lambda^2 + \omega_{cr}^2] Z_2 &= 0 \end{aligned}$$

A solution exists for  $Z_1$  and  $Z_2$  only if the determinant of the coefficients vanishes. The determinant yields

$$2 \xi_1 \lambda^3 + (1+K) \omega_{cr} \lambda^2 + 2 \xi_1 \omega_{cr}^2 \lambda + K \omega_{cr}^3 = 0 \quad (3.9)$$

This is called the *frequency equation*. It is cubic for flexible bearings, as compared to quadratic for rigid bearings.

### **B. Undamped Critical Speed**

All of the damping terms vanish and the frequency equation reduces to

$$(1 + K) \omega_{cr} \lambda^2 + K \omega_{cr}^3 = 0$$

and solving for  $\lambda$

$$\lambda = \pm i \omega_{cr} \sqrt{\frac{K}{1+K}}$$

The two eigenvalues are imaginary. Then the undamped critical speed on flexible bearings is

$$\omega_c = \omega_{cr} \sqrt{\frac{K}{1+K}} \quad (3.10)$$

The addition of flexible bearings decreases the undamped critical speed a bit. Figure 3.2 shows the variation with stiffness ratio  $K$ .

### C. Damped Critical Speeds

The damped frequency equation is a third order polynomial which is not easily solved. An approximate solution can be obtained but is omitted here. The solution for the third order polynomial may be obtained using a general matrix program such as **MATLAB**. For rotors up to five major mass stations, the **DYROBES** demo finite element program may also be employed.

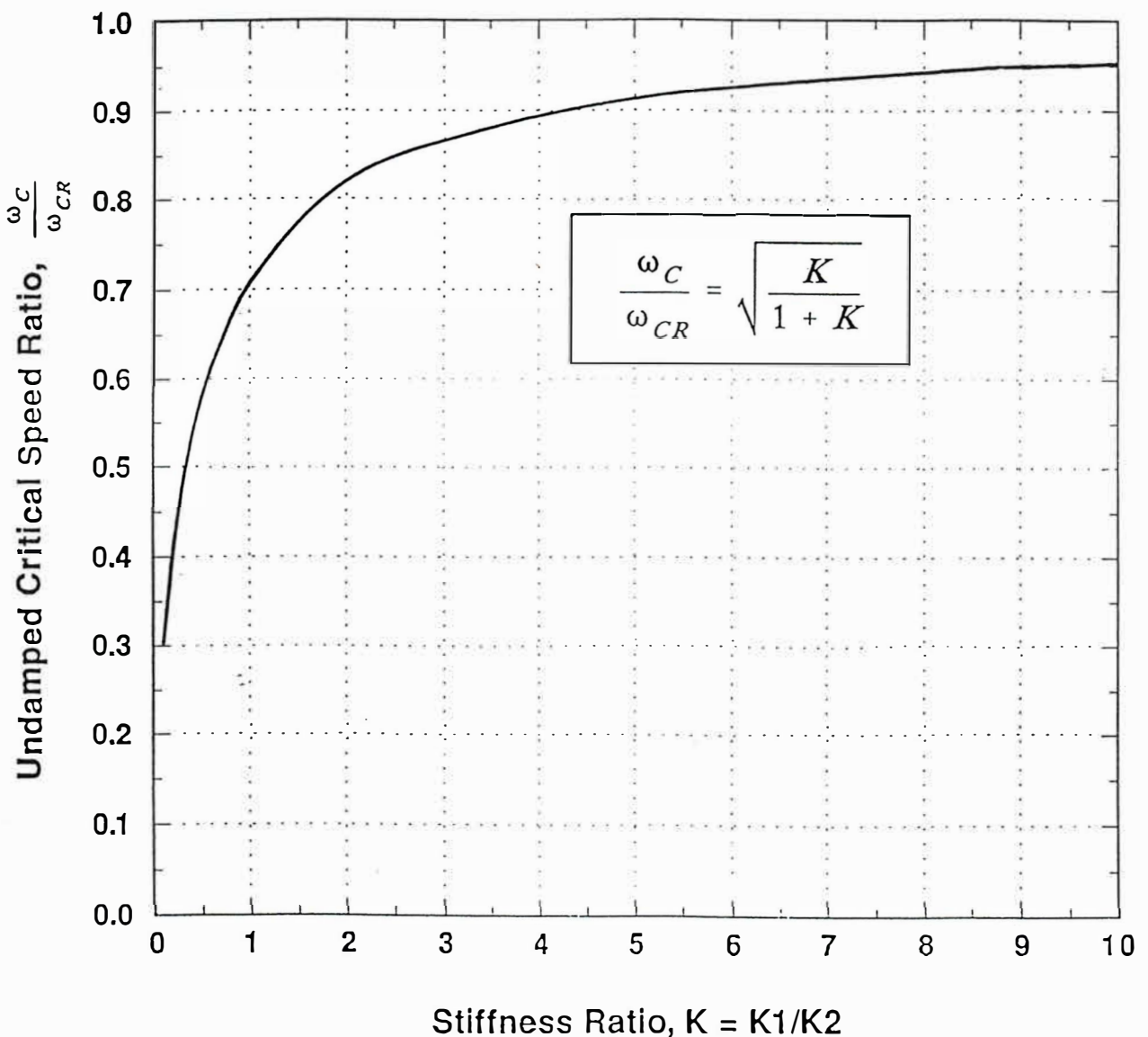


Figure 3.2 Reduction in Undamped Critical Speed Due to Flexible Bearings

### **Example 3.1 Undamped Critical Speed of Six-Stage Compressor On Flexible Bearings**

**Given:** The six-stage compressor has flexible tilting pad bearings with stiffnesses

$$K_{xx} = 140,000 \text{ N/mm (800,000 lbf/in)}$$

$$K_{yy} = 180,000 \text{ N/mm (1,040,000 lbf/in)}$$

evaluated from a suitable tilting pad computer program. Recall that the shaft stiffness and undamped critical on rigid bearings is

$$K_2 = 60,900 \text{ N/mm (348,000 lbf/in)}$$

$$\omega_{cr} = 3890 \text{ rpm}$$

**Objective:** Find the stiffness ratio  $K$  and the undamped critical speed  $\omega_c$  on flexible bearings.

**Solution:** The average bearing stiffness is

$$K_b = 1/2 (140,000 + 180,000) = 160,000 \text{ N/mm}$$

and the stiffness ratio is

$$K = K_1/K_2 = 2K_b/K_2 = 2 (160,000)/60,900$$

with the result

$$K = 5.25$$

This is a typical value for compressors. The undamped critical speed is obtained from Equation (3.10) as

$$\begin{aligned}\omega_c &= \omega_{cr} \sqrt{K/1+K} \\ &= 3890 \sqrt{5.25/1+5.25} = 3890 (0.92) \\ \omega_c &= 3560 \text{ rpm}\end{aligned}$$

The bearing flexibility reduces the critical to 92% of the rigid bearing case. Recall that the actual critical speed (shown in Figure 2.6) is 3700 rpm. The error in the simple formula is 140 rpm, or less than 4%.

### 3.3 Unbalance Response

#### A. Equations of Motion

Now the unbalance response of the rotor in flexible bearings is evaluated. Assume solutions of the form

$$Z_1 = Z_1 e^{i\omega t} \quad , \quad Z_2 = Z_2 e^{i\omega t}$$

The equations (3.5) and (3.6) become

$$(iC_1 \omega + K_1 + K_2) Z_1 - K_2 Z_2 = 0 \quad (3.11)$$

$$(-m \omega^2 + K_2) Z_2 - K_2 Z_1 = m e_u \omega^2 \quad (3.12)$$

where the exponential term has been canceled.

#### B. Vibration at Bearings

It is desired to reduce the rotor-bearing system to an equivalent system modeling the vibration at the bearings. This is normally the measured vibration in rotating machinery. Define effective mass and damping acting at the bearings as

$m_{1eq}$  = Equivalent Mass Acting At Bearings

$C_{1eq}$  = Equivalent Damping Acting at Bearings

These two terms allow the reduction of the two degree of freedom system in  $Z_1$  and  $Z_2$  into an equivalent single degree of freedom system in  $Z_1$ . Figure 3.3 illustrates.

Solving Eqs. (3.12) for  $Z_2$  yields

$$Z_2 = \frac{K_2}{-m\omega^2 + K_2} Z_1 + \frac{m e_u \omega^2}{-m \omega^2 + K_2}$$

Substituting this into Equation (3.11) gives

$$\left[ iC_1 \omega + K_1 + K_2 - \frac{K_2^2}{-m \omega^2 + K_2} \right] Z_1 = \frac{K_2 m e_u \omega^2}{-m \omega^2 + K_2}$$

Rearranging all of this and regrouping terms produces the equivalent rotor equation

$$(-m_{1eq} \omega^2 + i C_{1eq} \omega + K_1) Z_1 = m e_u \omega^2 \quad (3.13)$$

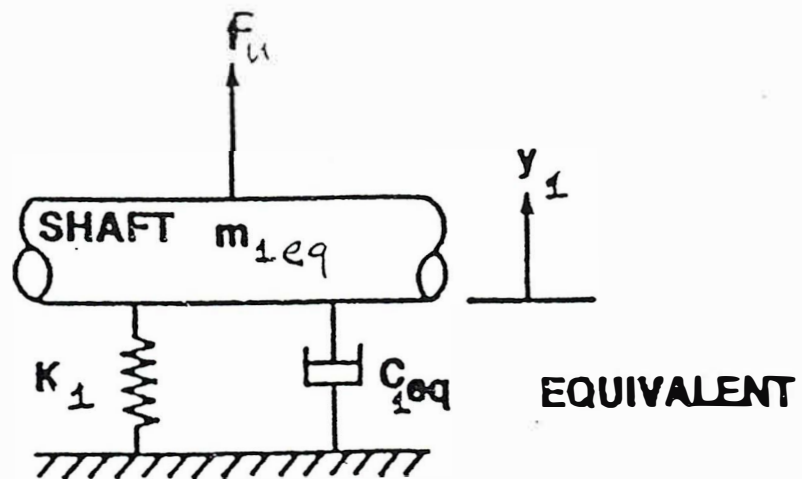
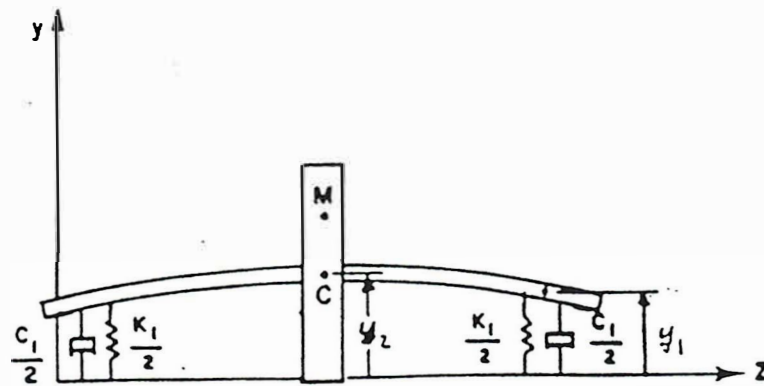


Figure 3.3 Equivalent System Modeling Vibration at the Bearings

where

$$m_{1eq} = (K_1 + K_2) / K_2 m$$

$$C_{1eq} = (1 - m/K_2 \omega^2) C_1$$

These are the equivalent mass and damping terms acting at the bearings.

Solving for  $Z_1$  gives

$$\frac{Z_1}{e_u} = \frac{m \omega^2}{(K_1 - m_{1eq} \omega^2) + i C_{1eq} \omega}$$

Define the terms

$$f = \omega/\omega_{cr} = \text{Frequency Ratio}$$

$$\xi_{1eq} = C_{1eq}/2m \omega_{cr} = \text{Equivalent Damping Ratio At Bearings}$$

Dividing the expression for  $Z_1/e_u$  by  $K_2$  produces

$$\frac{Z_1}{e_u} = \frac{f^2}{K - (1+K) f^2 + 2 i \xi_{1eq} f}$$

This is the complex vibration amplitude at the bearings.

The absolute amplitude ratio at the bearings  $A_1/e_u$  is then

$$\frac{A_1}{e_u} = \frac{f^2}{\{ [K - (1+K) f^2]^2 + [2 \xi_{1eq} f]^2 \}^{1/2}} \quad (3.15)$$

At the peak of vibration, Equation (3.10) gives the frequency ratio

$$f^2 = \left( \frac{\omega_c}{\omega_{cr}} \right)^2 = \frac{K}{1+K} \quad (\text{At Peak } f \approx 1)$$

and the bearing amplitude ratio is

$$\frac{A_1}{e_u} = \frac{f}{2\xi_{1eq}} \quad (\text{At Peak } f \approx 1)$$

$$\frac{A_1}{e_u} = \frac{1}{2 \xi_{1eq}} \sqrt{\frac{K}{1+K}} \quad (\text{At Peak } f \approx 1) \quad (3.16)$$

Here, the terms on the right are

$$K = \frac{K_1}{K_2}, \quad \frac{C_{1eq}}{C_1} = \frac{1}{1+K} \quad (3.17)$$

$$\xi_{1eq} = \xi_1 \frac{1}{1+K}$$

The amplitude ratio is different from that for the single mass rotor on rigid bearings, Equation (2.38).

Generally, the bearing damping  $C_1$  will be much higher than the rotor damping  $C_2$  considered in the last section. Thus, the amplitude ratio on flexible bearings will usually be much lower than the previous case in Section 2. It should be noted that this is not the amplitude at the rotor center  $A_2/e_u$  which will be larger.

#### ***D. Bearing Amplification Factor***

The bearing amplification factor is defined here as

$$AF_1 = \text{Bearing Amplification Factor}$$

It is taken as the peak value of  $A_1/e_u$  or

$$AF_1 = \frac{1}{2 \xi_{1eq}} \sqrt{\frac{K}{1+K}} \quad (3.18)$$

from Equation (3.16).

#### ***Example 3.2 Equivalent Damping and Amplification Factor for Six-Stage Compressor***

**Given:** The tilting pad bearings in the six-stage compressor have the damping coefficients

$$C_{xx} = 170 \text{ N-sec/mm (980 lbf-sec/in)}$$

$$C_{yy} = 190 \text{ N-sec/mm (1100 lbf-sec/in)}$$

evaluated from a bearing analysis computer program.

**Objective:** Find the equivalent damping  $C_{1eq}$ , the equivalent damping ratio  $\xi_{1eq}$ , and the amplification factor for this compressor.

**Solution:** The average bearing damping coefficient is

$$C_b = (170 + 190)/2 = 180 \text{ N-sec/mm}$$

The total bearing damping is then

$$C_1 = 2C_b = 2(180) = 360 \text{ N-sec/mm}$$

Equation (3.17) gives the equivalent damping for the bearing vibration just derived as

$$C_{1eq} = C_1 \frac{1}{1+K} = (360) \frac{1}{1+5.25}$$

$$C_{1eq} = 58 \text{ N-sec/mm (330 lbf-sec/in)}$$

Recall that the rotor damping  $C_2$  from Example 2.6 was 4.0 N-sec/mm. The bearing damping here is about 15 times larger.

The bearing damping ratio  $\xi_1$  is

$$\begin{aligned} \xi_1 &= \frac{C_1}{2m\omega_{cr}} = 360 \frac{\text{N-sec}}{\text{mm}} \times \frac{1}{2} \times \frac{1}{367 \text{ kg}} \\ &\times \frac{1}{407} \frac{\text{sec}}{\text{rad}} \times \frac{\text{kg-m}}{\text{N-sec}^2} \times \frac{1000 \text{ mm}}{\text{m}} \\ \xi_1 &= 120 \end{aligned}$$

while the equivalent damping ratio  $\xi_{1eq}$  from Equation (3.17) is

$$\xi_{1eq} = \xi_1 (1/1+K) = 1.20 (1/1+5.25)$$

$$\xi_{1eq} = 0.193$$

Note that the equivalent damping ratio is significantly reduced but still much larger than the rotor damping  $\xi_2 = 0.013$  from Example 6.2.

The amplification factor  $AF_1$  is obtained from Equation (3.18) as

$$\begin{aligned} AF_1 &= \frac{1}{2\xi_{1eq}} \sqrt{\frac{K}{1+K}} \\ &= \frac{1}{2(0.193)} \sqrt{\frac{5.25}{1+5.25}} \end{aligned}$$

The result is

$$AF_1 = 2.37 \text{ (Calculated)}$$

This value may be compared with the observed vibration plot shown in Fig. 2.6 with an amplification factor measured at the bearings of

$$AF_1 = 2.56$$

### 3.4 Amplification Factor By Half Power Method

The amplification factor is usually obtained from measured data by employing two points known as the half power points. These two points are located on each side of the vibration peak. Both are located at 0.707 of the peak amplitude - one on each side labeled  $\omega_1$  and  $\omega_2$  (or  $f_1$  and  $f_2$  for frequency ratios).

$$\omega_1 = f_1 = \text{First Half Power Point}$$

$$\omega_2 = f_2 = \text{Second Half Power Point}$$

It can be shown that these two points correspond to one-half of the peak power in the rotor. Also, let the peak response speed be denoted as

$$\omega_u = f_u = \text{Peak Response Speed}$$

These are all obtained from the vibration plot.

Then the amplification factor can be found from the formula

$$AF = \frac{\omega_u}{\omega_2 - \omega_1} = \frac{f_u}{f_2 - f_1} \quad (3.19)$$

The derivation for this formula is given in standard vibration textbooks and is not repeated here. Figure 3.5 illustrates the use of the half power points on the vibration plot for the case of  $\zeta_2 = 0.1$ . The peak amplitude is  $A_2/e_u = 0.5$  and the half power points are located at  $A_2/e_u = 3.5$ . This yields frequencies of

$$f_1 = 0.9, f_u = 1.0, f_2 = 1.1$$

and the amplification factor from

$$AF = Q = 1.0/1.1-0.9 = 1.0/0.2 = 5.0$$

These frequencies are also shown in Fig. 3.4.

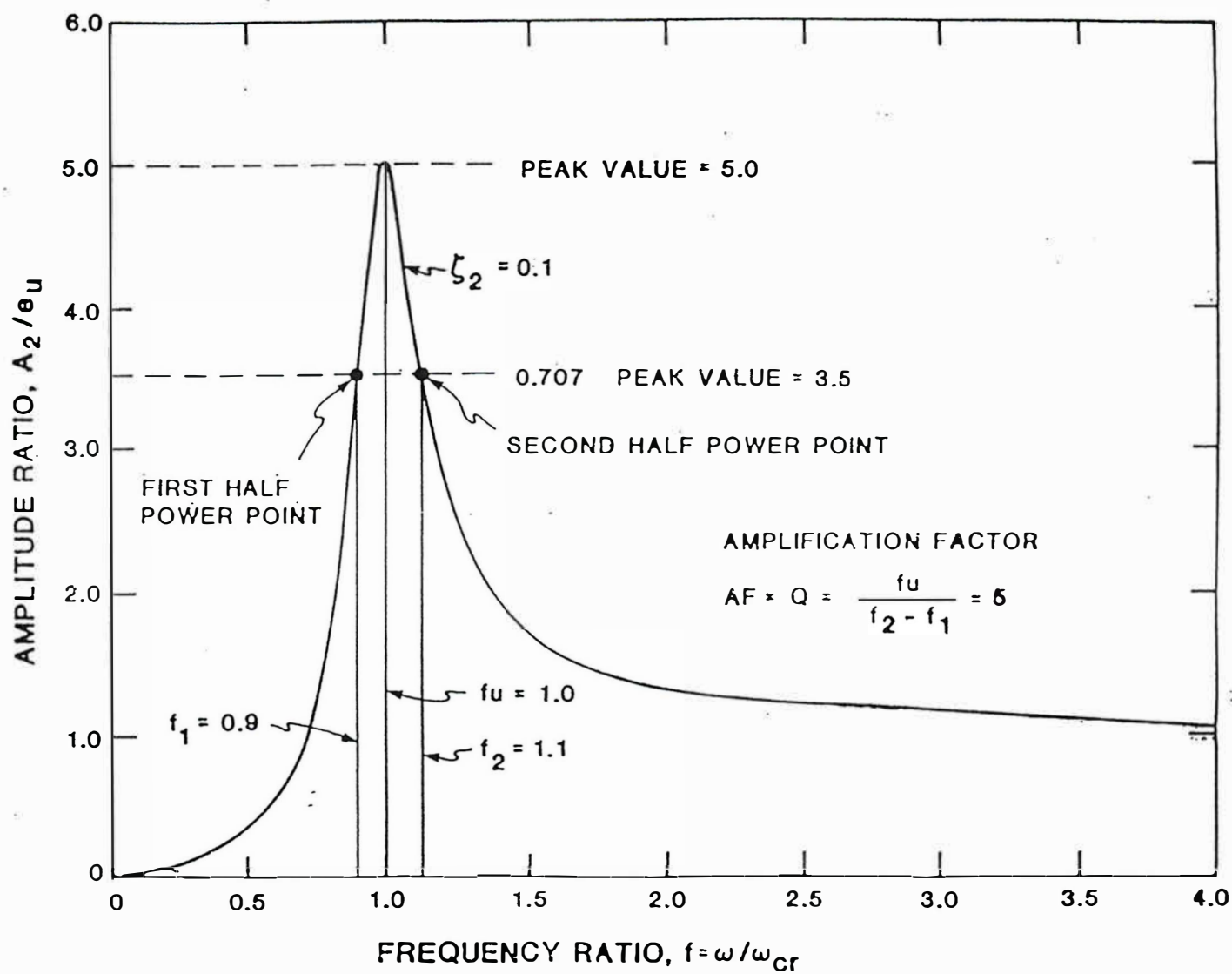


Figure 3.4 Amplification Factor Using Half Power Method

### 3.5 Rotor Center Span Amplitude and Optimum Bearing Damping

For a flexible rotor, this is an optimum value of bearing damping that one should design for. The optimum bearing damping results in the lowest rotor amplification factor, as measured at the rotor center. The optimum damping that should be selected is a function of the bearing to shaft stiffness ratio,  $K$ . For minimum rotor response, the dimensionless  $K$  value should be near unity. Rotors with  $K$  exceeding unity represent a condition in which the bearings are too stiff in relationship to the shaft. This requires more damping at the bearings to achieve the optimum damping and higher rotor amplification factors result.

From Equations (3.1) and (3.2), the complex synchronous motion at  $Z_1$  at the bearings may be expressed in terms of  $Z_2$  as follows

$$\begin{aligned} Z_1 &= \left( \frac{K_2}{K_1 + K_2 + i\omega C_1} \right) Z_2 \\ &= K_2 R_b Z_2 \end{aligned} \quad (3.20)$$

The bearing amplitude  $Z_2$  may be eliminated from Equation (3.8) to form

$$m \ddot{Z}_2 + K_2 (1 - R_b) Z_2 = m e_u \omega^2 e^{i\omega t} \quad (3.21)$$

Where  $R_b$  is a complex function of bearing damping, as well as stiffness.

A single equation to represent the rotor center motion may be written in terms of effective center plane stiffness  $K_{2e}$  as follows

$$m \ddot{Z}_2 + C_{2e} \dot{Z}_2 + K_{2e} Z_2 = m e_u \omega^2 e^{i\omega t} \quad (3.22)$$

Where

$$K_{2e} = K_2 \left[ \frac{K_1 (K_1 + K_2) + (\omega C_1)^2}{(K_1 + K_2)^2 + (\omega C_1)^2} \right]$$

$$C_{2e} = \frac{K_2^2 C_1}{(K_1 + K_2)^2 + (\omega C_1)^2}$$

In dimensionless form, Equation (3.21) becomes

$$\ddot{Z}_2 + 2\omega_{cr}\xi_{2e}\dot{Z}_2 + \omega_c^2 Z_2 = e_u \omega^2 e^{i\omega t} \quad (3.23)$$

Where

$$\xi_{2e} = \frac{\xi_1}{(1 + K)^2 + (2f\xi_1)^2}$$

$$\omega_c^2 = \omega_{cr}^2 \left[ \frac{K(1 + K) + (2f\xi_1)^2}{(1 + K)^2 + (2f\xi_1)^2} \right]$$

$$\xi_1 = \frac{C_{b1} + C_{b2}}{2M\omega_{cr}} = \frac{C_1}{M\omega_{cr}}$$

$M = \sum M_i \phi^2$  = modal mass for 1st critical speed  
 $\phi$  = normalized mode shape at  $i$ th station

Let  $R$  be defined as

$$R = \frac{2\xi_1}{1 + K}$$

Then the effective center plane damping ratio  $\xi_2$  is given by

$$\xi_{2e} = \frac{R}{2(1 + K)(1 + (Rf)^2)} \quad (3.24)$$

The rotor amplification factor at the critical speed is given by

$$AF_2 = A_c = \frac{1}{2\xi_2} \quad (3.25)$$

Black has shown that for optimum damping with  $f \approx 1$  then

$$R = 1$$

The effective center plane damping ratio is

$$\xi_{2e} = \frac{1}{4(1+K)}$$

The rotor amplification factor with optimum bearing damping is from

$$A_{c_{opt}} = 2(1+K) \quad (3.26)$$

The above equation illustrates the important conclusion that the  $K$  ratio should be kept as low as possible in order to achieve an optimum rotor with a low amplification factor. This equation implies that the bearing stiffness ( $K_1 = K_{b1} + K_{b2}$ ) should not be of greater value than the shaft stiffness  $K_2$ . If the sum of the bearing stiffnesses greatly exceeds the shaft stiffness, then it will be impossible to achieve a rotor with a low amplification factor regardless of the bearing damping.

### *Example 3.3 Rotor Center Plane Amplification Factor for Six-Stage Compressor*

From Example 3.2

$$C_1 = 1,040 \text{ lbf-sec/in (364 N-sec/mm)}$$

$$= 2,080 \text{ lb-sec/in}$$

$$C_c = 2M\omega_{cr} = \frac{2 \times 809 \text{ lb}}{386} \times 407.3 \text{ rad/sec}$$

$$= 1,707 \text{ lbf-sec/in (299 N-sec/mm)}$$

$$\xi_1 = \frac{C_1}{C_c} = 1.22$$

$$R = \frac{2 \times 1.22}{1 + 5.25} = 0.39$$

$$\xi_{2e} = \frac{R}{2(1+K)(1+(Rf)^2)} = \frac{0.39}{2 \times 6.25 \times 1.151}$$

$$AF_2 = Q = \frac{1}{2\xi_2} = \frac{1}{2 \times .0271} = 18.5$$

The rotor amplification factor at the critical speed is over 18. The optimum bearing damping for this high stiffness ratio of  $K = 5.25$  is given by

$$C_b = \frac{M \omega_{cr}}{2} (1 + K) = \frac{C_c}{4} (1 + K)$$

$$= \frac{1,707}{4} (6.25) = 2,667 \text{ lb-sec/in (467 N-sec/mm)}$$

The minimum center span amplification factor that is achievable is

$$A_{c_{opt}} = 2(1 + K) = 2 \times 6.25 = 12.50$$

It is apparent from this calculation that in order to achieve a lower amplification factor for the six-stage compressor, the  $K$  ratio must be reduced. This is achieved by using either softer bearings or by increasing the shaft stiffness.

## SECTION 4

### COMPUTER SIMULATIONS OF FLEXIBLE ROTOR ON FLEXIBLE SUPPORTS

#### 4.1 Single-Mass Rotor on Rigid Supports

A 5-station model using the *DyRoBeS* computer program was used to simulate the single-mass rotor, as given in Table 2.5. Table 4.1 represents a rotor 72 inches long with a shaft diameter of 6.5 inches. A concentrated weight of 473 lb was placed at the center span of the rotor. In this model, the shaft weight is 676 lb and the total rotor weight is 1,149 lb. Although the weight of this rotor model is lower than the total rotor weight as given in Table 2.5, the model properties for the first mode are equivalent to the 6-stage compressor.

Figure 4.1 represents the rotor 1st mode shape at 3,782 RPM. This is very close to the hand calculation of 3,787 RPM, as shown in Table 2.6. The shape of the rotor first mode on rigid bearings is approximately a sine curve with zero amplitude at the bearings and maximum amplitude at the rotor center.

Table 4.2 represents the 1st critical speed mode shape and distribution of strain and kinetic energy for the rotor system. In this model, a bearing stiffness of  $1.0\text{E}7$  lb/in was assumed. This high value of stiffness is not exactly a rigid support, as there is 1% strain energy in each bearing. It is of interest to note that 79% of the kinetic energy is associated with the center plane of the rotor. If the shaft were treated as a massless shaft, then the center section kinetic energy would be 100%. This would represent the case of the Jeffcott rotor.

In Table 4.2, the maximum amplitude is equal to unity. This is because in a critical speed calculation, the amplitude is relative. The actual shaft amplitude is a function of the rotor unbalance and the amount of bearing damping. The condition of only 1% bearing strain energy is very similar to the situation of utility fan rotors mounted on rolling element bearings. The bearing stiffness is of the order of  $1\text{E}6$  to  $2\text{E}6$  lb/in and essentially no bearing damping. In this case, it would be dangerous to traverse the critical speed region because of the lack of system damping. In Table 4.2 is a summary of the bearing data and rotor modal properties. In this example, it is seen that the rotor modal weight  $W_m$  mode is listed as 807.4 lb. An increase of bearing stiffness from  $1\text{E}7$  to  $1\text{E}8$  lb/in will cause the critical speed to increase to 3,818 RPM and the bearing strain energy will approach zero.

The ratio of the bearing strain energy to the total strain energy for the 1st mode should be carefully checked. The bearing total strain energy should be above 30% if one is to avoid high amplification factors at the 1st critical speed. If the bearing strain energy drops below this ratio, then this is an indication that the bearing stiffness is excessive to the shaft stiffness.

FileName: C:\DYROBES\_Ver6\Example\SMASS\_6ST\_COMP\_Sect4.rot

\*\*\*\*\* Unit System = 2 \*\*\*\*\*  
Engineering English Units (s, in, Lbf, Lbm)

#### MODEL SUMMARY

\*\*\*\*\*System Parameters\*\*\*\*\*

1 Shafts  
4 Elements  
8 SubElements  
1 Materials  
1 Rigid Disks  
0 Unbalances  
2 Linear Bearings  
5 Stations  
20 Degrees of Freedom

\*\*\*\*\* Description Headers\*\*\*\*\*

CRITICAL SPEED ANALYSIS OF 6 STAGE COMPRESSOR SIMULATED AS  
A SINGLE MASS ROTOR

Wtotal = 1618 Lb, Wmodal = 809 Lb, L = 72 In, D = 6.6 In ,  
Kbrg = 1.0E7 (Rigid Bearings)

\*\*\*\*\*Material Properties\*\*\*\*\*

Property no	Mass Density (Lbm/in <sup>3</sup> )	Elastic Modulus (Lbf/in <sup>2</sup> )	Shear Modulus (Lbf/in <sup>2</sup> )
1	.28300	.30000E+08	.12000E+08

\*\*\*\*\* Shaft Elements\*\*\*\*\*

Ele no	Sub Ele no	Left End Loc (in)	Length (in)	----- Mass -----		--- Stiffness ---		Material no
				Inner Diameter (in)	Outer Diameter (in)	Inner Diameter (in)	Outer Diameter	
1	1	.000	9.0000	.0000	6.5000	.0000	6.5000	1
	2	9.000	9.0000	.0000	6.5000	.0000	6.5000	1
2	1	18.000	9.0000	.0000	6.5000	.0000	6.5000	1
	2	27.000	9.0000	.0000	6.5000	.0000	6.5000	1
3	1	36.000	9.0000	.0000	6.5000	.0000	6.5000	1
	2	45.000	9.0000	.0000	6.5000	.0000	6.5000	1
4	1	54.000	9.0000	.0000	6.5000	.0000	6.5000	1
	2	63.000	9.0000	.0000	6.5000	.0000	6.5000	1

\*\*\*\*\*

Table 4.1 5- Station Jeffcott Rotor Model On Rigid Supports  
With 808 LB Modal Weight

```

***** Rigid Disks *****
      Station      Diametral      Polar      Skew      Skew
      Number      Mass      Inertia      Inertia      X      Y
                (Lb)      (Lb-in^2)      (Lb-in^2)      (degree)      (degree)

          3          474.00          .00000          .00000          .0000          .0000

*****

***** Rotor Equivalent Rigid Body Properties *****
      Rotor Left End      C.M.      Diametral      Polar      Speed
      no      Location      Length      Location      Mass      Inertia      Inertia      Ratio
                (in)      (in)      (in)      (Lb)      (Lb-in^2)      (Lb-in^2)

          1          .000          72.000          36.000          1150.1          .29388E+06          3571.          1.0000

*****

***** Bearing Coefficients *****
      StnI, J      Angle      rpm      ----- Coefficients -----
                                Bearing No. 1
                                (Linear Bearing)
                                Kt: Lbf/in, Ct: Lbf-s/in; Kr: Lbf-in, Cr: Lbf-in-s
                                Direct Stiffness And Damping Coefficients:
      Kxx      Kxy      Kyx      Kyy      .100000E+08      .000000      .000000      .100000E+08
      Cxx      Cxy      Cyx      Cyy      1.00000      .000000      .000000      1.00000

                                Moment Stiffness And Damping Coefficients:
      Krr      Krs      Ksr      Krr      .000000      .000000      .000000      .000000
      Crr      Crs      Csr      Crr      .000000      .000000      .000000      .000000

                                Bearing No. 2
                                (Linear Bearing)
                                Kt: Lbf/in, Ct: Lbf-s/in; Kr: Lbf-in, Cr: Lbf-in-s
                                Direct Stiffness And Damping Coefficients:
      Kxx      Kxy      Kyx      Kyy      .100000E+08      .000000      .000000      .100000E+08
      Cxx      Cxy      Cyx      Cyy      1.00000      .000000      .000000      1.00000

                                Moment Stiffness And Damping Coefficients:
      Krr      Krs      Ksr      Krr      .000000      .000000      .000000      .000000
      Crr      Crs      Csr      Crr      .000000      .000000      .000000      .000000

*****

***** Gravity Constant (g) (in/s^2) *****
                                X direction = .000000      Y direction = -386.088

*****

```

Table 4.1 5- Station Jeffcott Rotor Model On Rigid Supports  
With 808 LB Modal Weight  
(Continued)

## \*\*\*\*\* Critical Speed Analysis \*\*\*\*\*

No	RPM	Rad/Sec	Hz
1	3782.42	396.094	63.0404
2	22396.0	2345.31	373.267
3	37276.3	3903.56	621.272

## \*\*\*\*\* Mode Shapes for Critical Speed Analysis \*\*\*\*\*

## \*\*\*\*\* Mode No. 1 \*\*\*\*\*

Whirl Speed = 3,782.4 RPM = 396.09 Rad /Sec = 63.04 Hz

## \*\*\*\*\* (Normalized) Displacements (Eigenvector) \*\*\*\*\*

## \*\*\*\*\* Shaft Element Displacements \*\*\*\*\*

		Left End		Right End	
stn	subele	Translation	Rotation	Translation	Rotation
1	1	.0184	.0410	.3836	.0382
	2	.3836	.0382	.6993	.0300
2	1	.6993	.0300	.9172	.0170
	2	.9172	.0170	1.0000	.0000
3	1	1.0000	.0000	.9172	-.0170
	2	.9172	-.0170	.6993	-.0300
4	1	.6993	-.0300	.3836	-.0382
	2	.3836	-.0382	.0184	-.0410
5	1	.0184	-.0410		

## \*\*\*\*\*

Modal Mass = 2.0896      Modal Stiffness = 327,840 lb/in  
(807.4 lb)

## \*\*\*\*\* Energy Distribution (Percentage) \*\*\*\*\*

		Kinetic Energy		Potential Energy
		Translation	Rotation	(Strain)
Rigid Disks				
Stn				
	3	58.753	.000	.000
Shaft Elements				
Element				
	1	3.777	-.078	7.595
	2	16.943	-.019	41.377
	3	16.943	-.019	41.377
	4	3.777	-.078	7.595
Bearings				
Stn I	Stn J			
1	0	.000	.000	1.028
5	0	.000	.000	1.028

## \*\*\*\*\*

Table 4.2 1<sup>ST</sup> Critical Speed Mode And Energy Distribution

UNDAMPED CRITICAL SPEED ANALYSIS OF 6 STAGE COMPRESSOR SIMULATED AS A  
 SINGLE MASS ROTOR,  $W_{total} = 1618 \text{ Lb}$ ,  $W_{modal} = 889 \text{ Lb}$ ,  $L=72 \text{ IN}$ ,  $D=6.5 \text{ IN}$   
 CRITICAL SPEED CALCULATION ON STIFF SUPPORTS TO SIMULATE RIGID BRG CASE  
 MODE #1 : Frequency = 63.49 HZ (3810 RPM)  
 Mode is SYNCHRONOUS

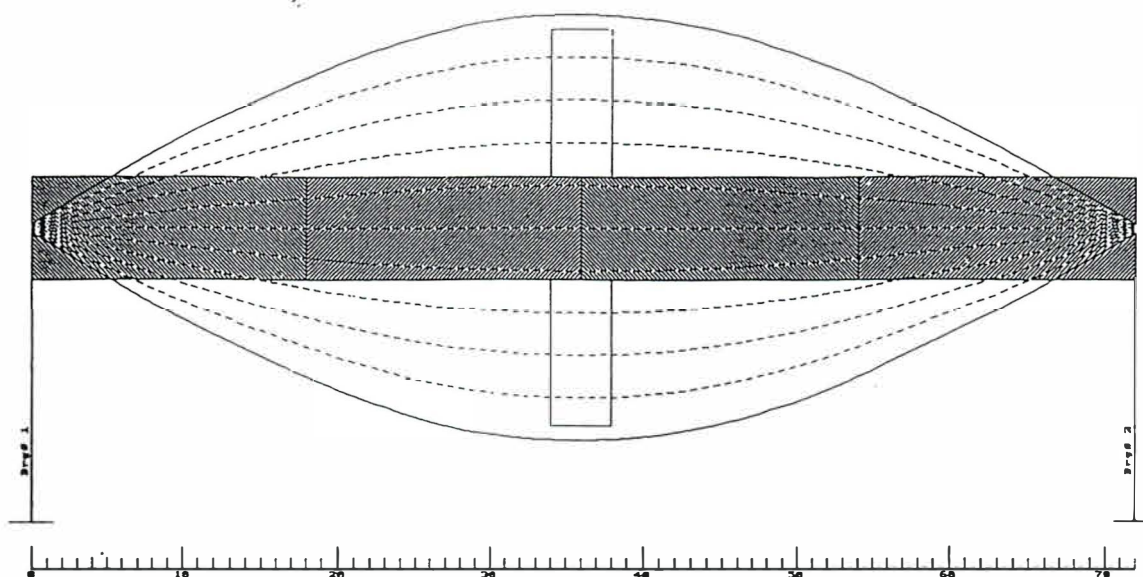


Figure 4.1 Compressor Rotor 1st Critical Speed  
 on Rigid Supports Using *CRITSPD-PC*  
 $K_b = 10E6 \text{ Lb/in}$ ;  $N_{cr} = 3,810 \text{ RPM}$

Critical Speed Mode Shape

ANALYSIS OF A 6 STAGE COMPRESSOR (SINGLE MASS ROTOR MODEL)  
 ROTOR,  $W_{total} = 1618 \text{ Lb}$ ,  $W_{modal} = 889 \text{ Lb}$ ,  $L = 72 \text{ In}$ ,  $D = 6.5 \text{ In}$   
 STIFF BEARINGS =  $100E6 \text{ Lb/In}$

ANALYSIS OF 6 STAGE COMPRESSOR SIMULATED AS A SINGLE MASS  
 Spin/Whirl Ratio = 1.0000 — Kxx used  
 Mode No = 1, Critical Speed = 3849 rpm

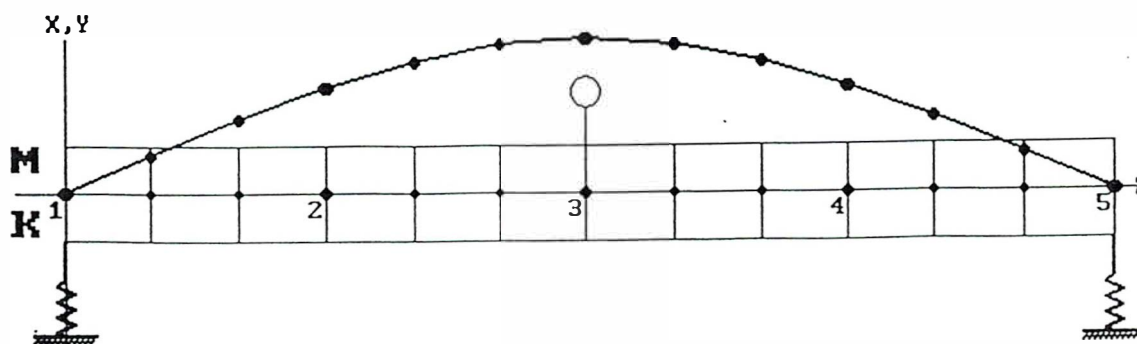


Figure 4.2 Compressor Rotor 1st Critical Speed  
 Using *DYROBES* -  $K_b = 10E7 \text{ Lb/in}$ ;  $N_{cr} = 3,849 \text{ RPM}$

For the value of  $K = 2K_b/K_s = 5.25$ , as given in Section 3.2, the amplification factor with optimum damping will be

$$A_c = 2(1 + K) = 12.5$$

Figure 4.2 represents the same rotor model as shown in Figure 4.1. Figure 4.2 was generated by the *DyRoBeS* finite element program, whereas Figure 4.1 was generated by a transfer matrix method. The critical speed on rigid supports for Figure 4.2, computed by the finite element method, is 3,849 RPM, which is identical to the results computed by the transfer matrix method. A 5-station model was used in this case with 3 subelements in each shaft element.

#### 4.2 Single-Mass Rotor on Flexible Supports

Figure 4.3 represents the critical speed of the rotor assuming a bearing stiffness of 910,000 lb/in. In this case, the critical speed has been reduced from 3,848 RPM to 3,471 RPM. Figure 4.3 represents the compressor rotor 1st critical speed with a finite bearing stiffness of  $K_b = 910,000$  lb/in. In this case, the critical speed has been reduced to 3,471 RPM. A similar calculation by the *DyRoBeS* program shows a critical speed of 3,461 RPM.

One useful technique is to plot the rotor critical speed or speeds as a function of bearing stiffness. Figure 4.4 represents the rotor 1st critical speed for various values of bearing stiffness. Figure 4.4 is plotted in log scale of critical speed versus bearing stiffness from 100,000 lb/in to 10E6 lb/in. At low values of bearing stiffness around 100,000 lb/in, the rotor acts more as a rigid body in cylindrical whirl. For stiffness values exceeding 1 million lb/in, the critical speed begins to asymptotically approach 3,849 RPM. As the critical speed plot begins to flatten, this is an indication that an increase of bearing stiffness has a disproportionately small effect on increasing the critical speed. The implication of this is that there is no strain energy in the bearings and that the bearing motion is approaching a nodal point.

From Table 4.2, the modal rotor stiffness is  $K_s = 333,259$ . The dimensionless  $K$  ratio is given by:

$$K = \frac{2K_b}{K_s} = \frac{2 \times 910,000}{333,259} = 5.46$$

The approximate reduced critical speed is given by:

$$N_c = N_{cr} \sqrt{\frac{K}{K+1}} = 3,809 \sqrt{\frac{5.46}{6.46}} = 3,501 \text{ RPM}$$

This compares closely to the value of 3,471 RPM shown in Figure 4.3.

UNDAMPED CRITICAL SPEED ANALYSIS OF 6 STAGE COMPRESSOR SIMULATED AS A  
 SINGLE MASS ROTOR,  $W_{total} = 1618 \text{ Lb}$ ,  $W_{modal} = 889 \text{ Lb}$ ,  $L=72 \text{ IN}$ ,  $D=6.5 \text{ IN}$   
 BEARING AVERAGE STIFFNESS =  $910,000 \text{ LB/IN}$ ,  $N_{cr} = 3348$   
 MODE #1 : Frequency =  $57.85 \text{ HZ}$  ( $3471 \text{ RPM}$ )  
 Mode is SYNCHRONOUS

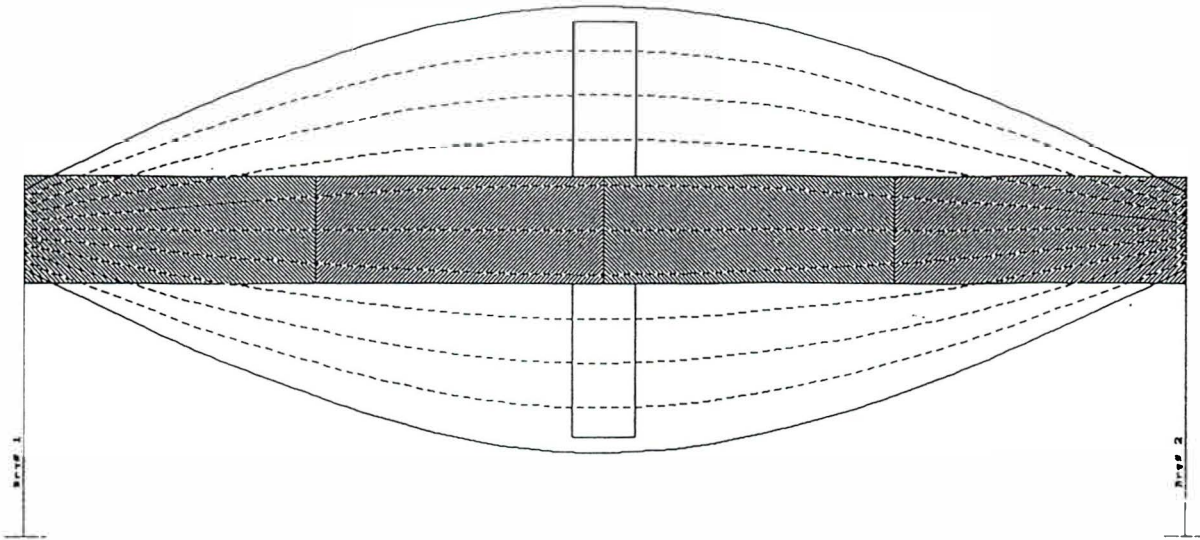


Figure 4.3 Compressor Rotor 1st Critical Speed  
 With  $K_b = 910,000 \text{ Lb/in}$ ;  $N_c = 3,471 \text{ RPM}$

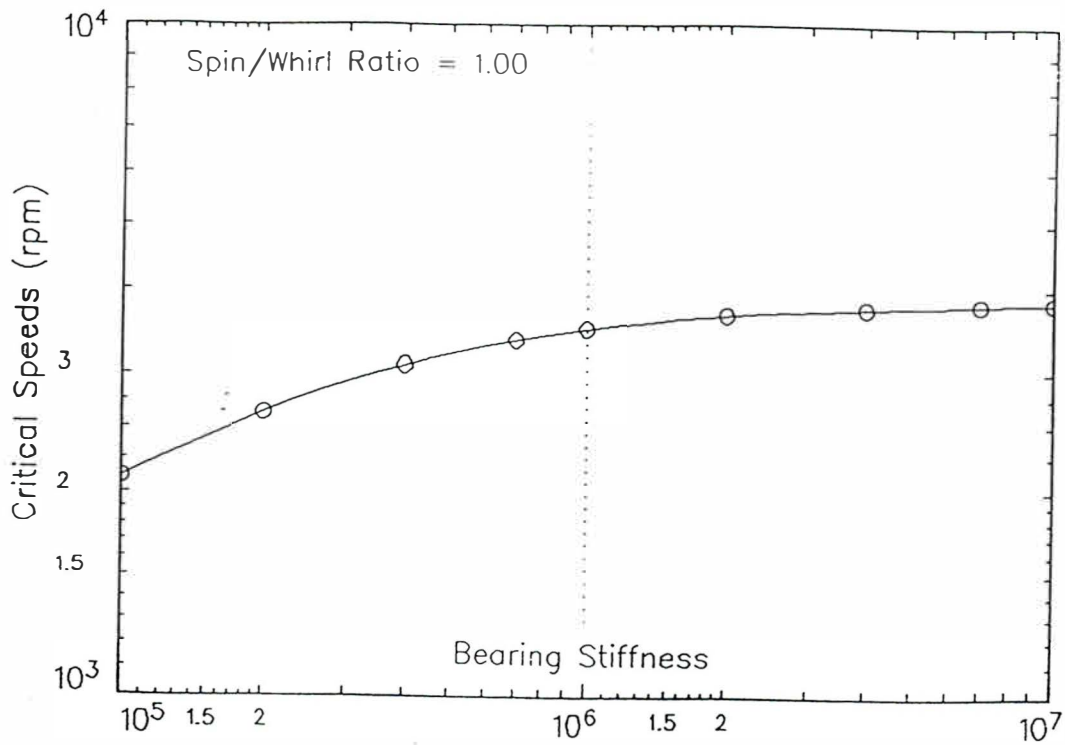


Figure 4.4 Compressor 1st Critical Speed  
 With Various Values of Bearing Stiffness

### 4.3 Undamped and Damped Critical Speed of 6-Stage Compressor on Flexible Bearings

Figure 4.5 represents the finite element analysis of the compressor undamped 1st critical speed with  $K_b = 910,000$  lb/in nominal bearing stiffness. The effect of bearing flexibility reduces the rotor 1st critical speed from 3,847 RPM to 3,461 RPM, as shown in Figure 4.5. The finite element calculation of 3,461 RPM is very close to the value of 3,471 RPM, as calculated by the transfer matrix method.

In Figure 4.6, the compressor first forward whirl mode was computed with a horizontal bearing stiffness of  $K_{xx} = 800,000$  lb/in and a vertical bearing stiffness of  $K_{yy} = 1.04E6$  lb/in. In addition to the bearing stiffness, bearing damping of  $C_{xx} = 980$  lb-sec/in and  $C_{yy} = 1,100$  lb-sec/in was included. Figure 4.6 represents the 1st critical speed forward whirl mode. Since the bearing stiffness in the horizontal and vertical directions are dissimilar, the orbit is not circular. Note the considerable difference of the amplitude as observed at the bearings and at the center of the rotor. The log decrement  $\delta$  for this forward mode is .191. This corresponds to a rotor center plane amplification factor of 16.4. The amplification factor as observed at the bearings will be considerably smaller. An improvement in the overall log decrement for the compressor first critical speed may be achieved by reducing both the bearing stiffness and damping for the system.

The modal damping  $\xi$  is related to the log decrement  $\delta$  as follows:

$$\xi = \frac{\delta}{\sqrt{4\pi^2 + \delta^2}}$$

The rotor amplification factor is given by:

$$A_c = \frac{1}{2\xi} = \frac{\pi}{\delta} \text{ for small values of } \delta.$$

### Critical Speed Mode Shape

ANALYSIS OF 5 STAGE COMPRESSOR SIMULATED AS A SINGLE MASS  
 ROTOR,  $W_{total} = 1618$  Lb,  $W_{modal} = 809$  Lb,  $L = 72$  In,  $D = 6.5$  In  
 BEARING AVERAGE STIFFNESS =  $910,000$  Lb/In,

ANALYSIS OF 6 STAGE COMPRESSOR SIMULATED AS A SINGLE MASS  
 Spin/Whirl Ratio =  $1.0000$  --  $K_{xx}$  used  
 Mode No = 1, Critical Speed =  $3461$  rpm

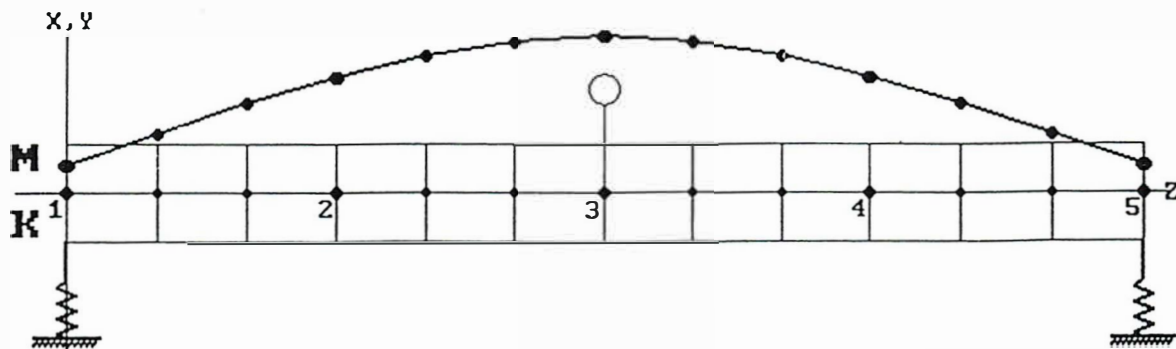


Figure 4.5 Compressor Undamped Critical Speed Mode With  $K_b = 910,000$  Lb/in

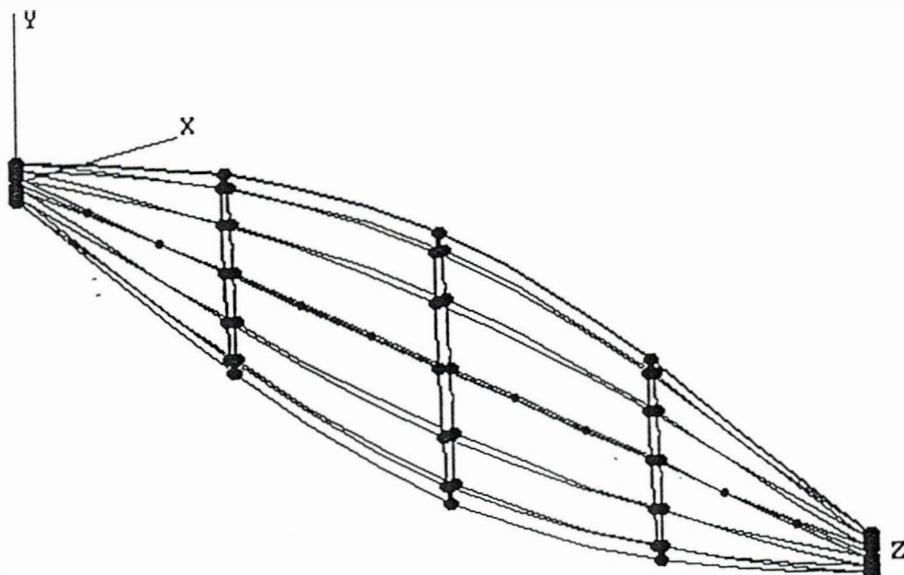


Figure 4.6 Compressor 1st Forward Whirl Mode  
 With  $K_{xx} = 800,000$  Lb/in,  $K_{yy} = 1.04E6$  Lb/in  
 $C_{xx} = 980$  Lb-sec/in,  $C_{yy} = 1,100$  Lb-sec/in  
 $\delta = 0.191$ ,  $A_c = 16.4$

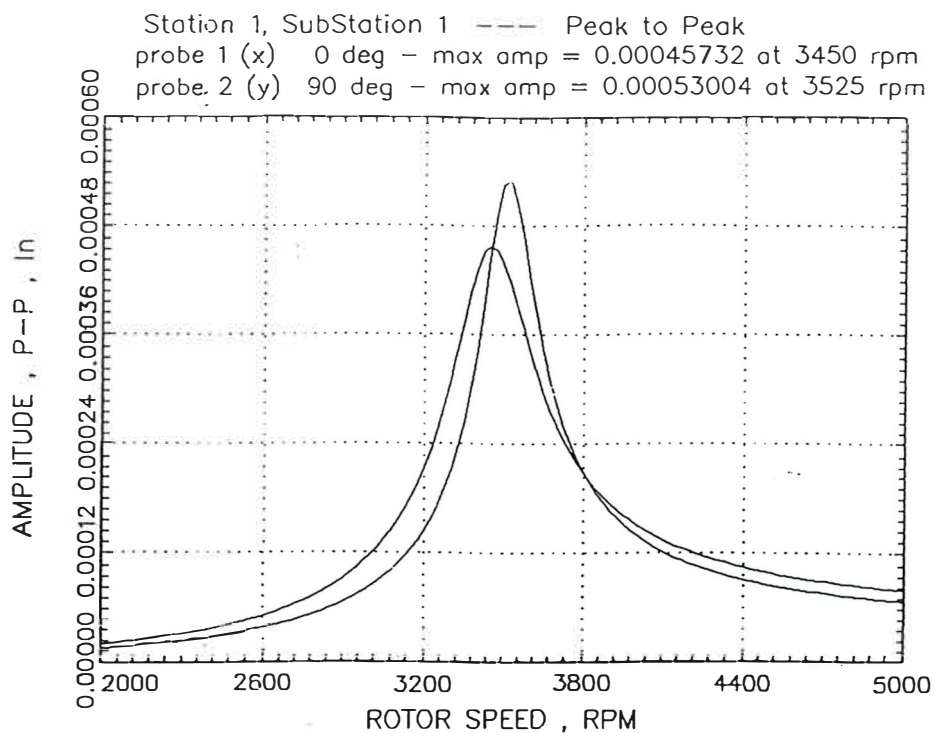
#### 4.4 Unbalance Response of a 6-Stage Compressor with Centered Plane Unbalance

Figure 4.7 represents the bearing amplitude in the horizontal and vertical directions with center span unbalance. Note that the amplitudes in the X and Y directions are slightly different, due to the bearing asymmetry. Maximum bearing amplitude occurs at the vertical direction, even though the bearing damping is higher. The maximum amplitude in the vertical direction is .53 mils p-p at 3,525 RPM and the maximum amplitude in the horizontal direction is .46 mils at 3,450 RPM.

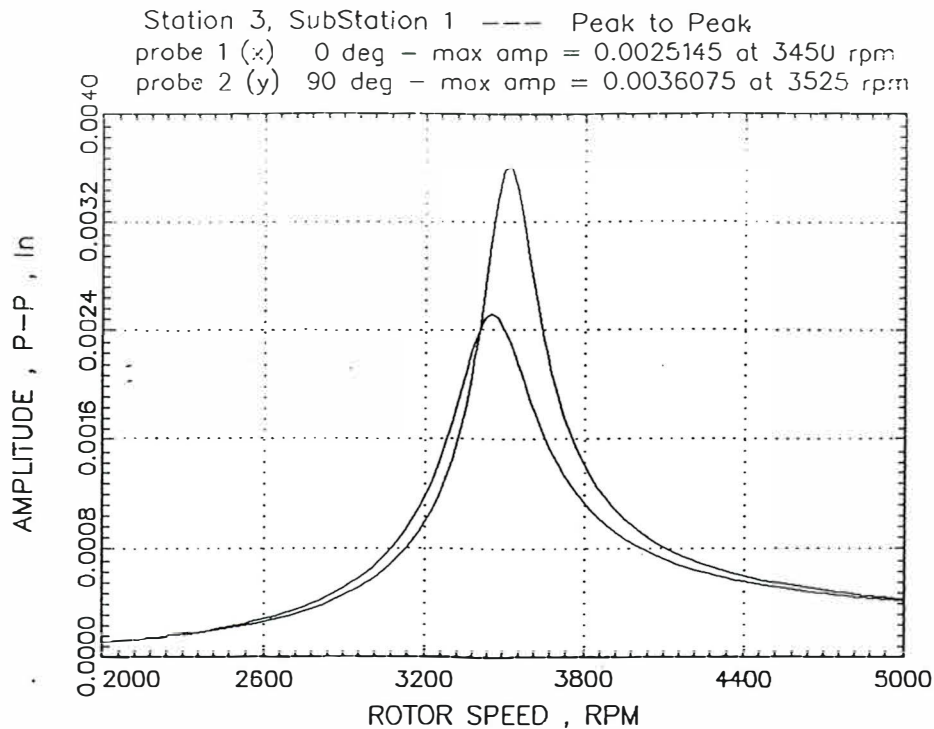
Figure 4.8 represents the center span motion. The maximum center span amplitude occurs at the vertical direction and is 3.6 mils at 3,525 RPM. The difference between the center span vertical amplitude and the bearing amplitude is a factor of 6.8. Note that as the rotor speed exceeds 5,000 RPM, the amplitudes in the horizontal and vertical directions are identical. This represents circular motion. At a higher speed of around 7,000 RPM, the amplitude at the center becomes constant. This represents the unbalance eccentricity vector. The rotor amplification factor may also be determined by dividing the peak rotor amplitude in either the horizontal or vertical directions by the unbalance eccentricity vector measured at the higher speed.

Figure 4.9 represents the polar plot of the horizontal motion from 2,000 to 5,000 RPM. The phase angle at the critical speed occurs at approximately a phase lag of  $120^\circ$ . Figure 4.10 represents the polar plot of the horizontal motion at the shaft center. At the critical speed of 3,450 RPM, the phase lag is  $90^\circ$  from the unbalance eccentricity vector. Note, however, that there is a  $30^\circ$  phase angle lag of the bearing vibration from the rotor center motion. This phase angle difference between the bearing and the shaft center motion should be taken into consideration when attempting center plane balancing based on the bearing amplitude and phase readings. The balance trial weight should be placed at a  $60^\circ$  lag from the maximum journal amplitude vector. This would place it at approximately  $180^\circ$ , which would be the correct location.

Figure 4.11 represents the compressor center and journal orbits at 3,525 RPM. This represents the speed at which the peak rotor amplitudes at both the journal and center are observed. Note that due to the asymmetry of the tilting-pad bearings, the orbit at the critical speed is elliptical, rather than circular. The phase angle at the speed of maximum amplitude is not  $90^\circ$ , as would be the case for a slightly damped rotor, but is closer to  $120^\circ$ . Figure 4.12 represents the compressor and journal orbits at 5,000 RPM. This speed is well above the rotor first critical speed and the phase angle of both the compressor center and journal have gone through approximately a  $180^\circ$  shift. The timing mark on the orbit indicates the location where the first balance trial weight should be placed.



**Figure 4.7 Bearing Amplitude With Center Span Unbalance**

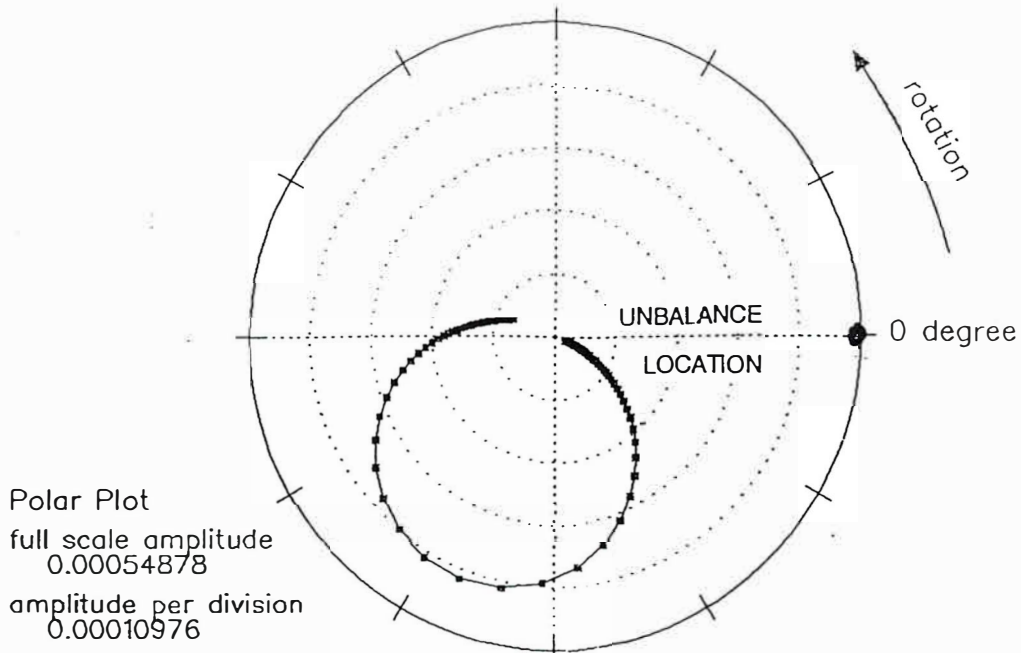


**Figure 4.8 Compressor Center Span Motion vs. Speed**

Rotational speed range = 2000 - 5000 rpm

x: probe 1 (x) 0 deg - max amp = 0.00045732 at 3450 rpm

o: probe 2 (y) 0 deg - max amp = 0.00045732 at 3450 rpm

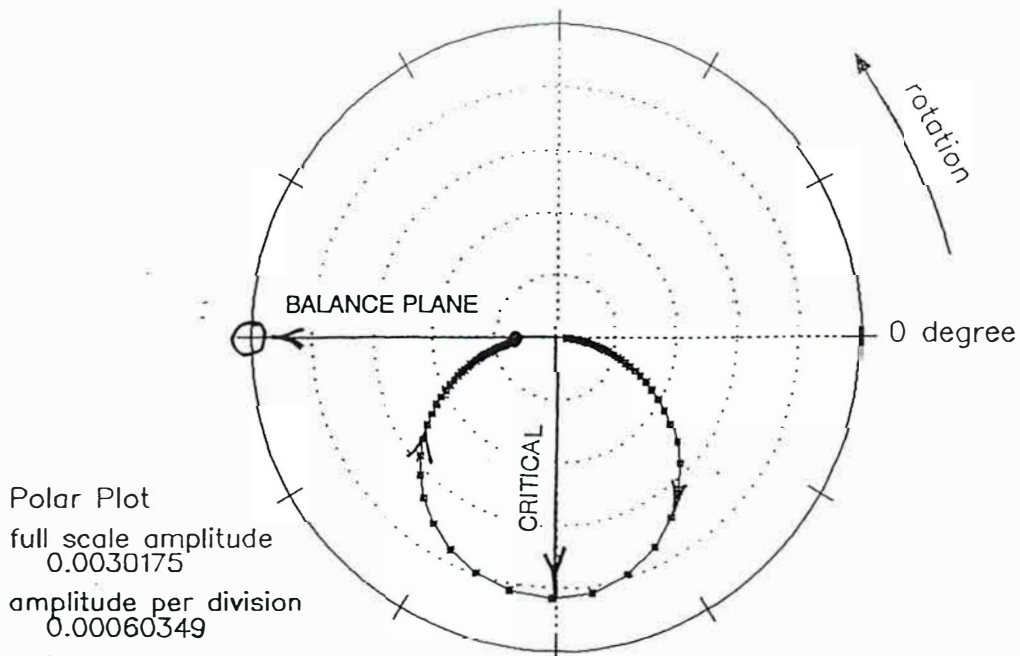


**Figure 4.9 Polar Plot of Horizontal Motion at Bearing**

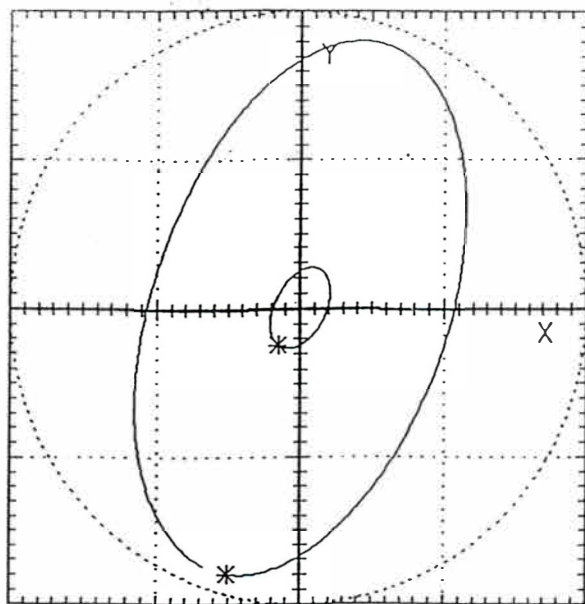
Rotational speed range = 2000 - 5000 rpm

x: probe 1 (x) 0 deg - max amp = 0.0025145 at 3450 rpm

o: probe 2 (y) 0 deg - max amp = 0.0025145 at 3450 rpm



**Figure 4.10 Polar Plot of Horizontal Motion at Shaft Center**



Full scale amplitude = 0.002  
Amplitude per division = 0.001

#### Orbit Parameters

Rotational Speed  
3525 rpm

Station: 3  
Substation: 1

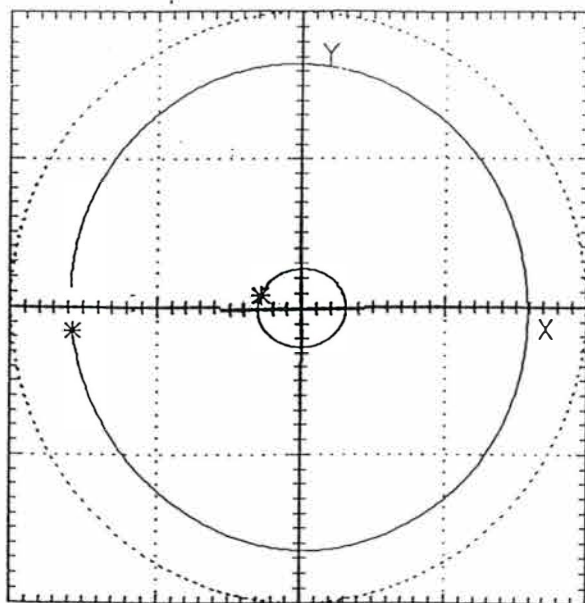
Semi-Major Axis  
0.0018745

Semi-Minor Axis  
0.00102637

Attitude Angle  
71.02 degree

Forward Precession

**Figure 4.11 Compressor and Journal Orbits at 3,525 RPM**



Full scale amplitude = 0.00026  
Amplitude per division = 0.00013

#### Orbit Parameters

Rotational Speed  
5000 rpm

Station: 3  
Substation: 1

Semi-Major Axis  
0.000215207

Semi-Minor Axis  
0.000204974

Attitude Angle  
107.65 degree

Forward Precession

**Figure 4.12 Compressor and Journal Orbits at 5,000 RPM**